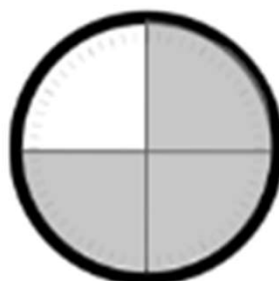


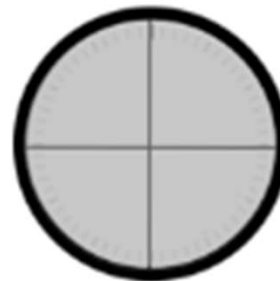
Time Worksheets (Half & Quarter Hour)

1. Tell what fraction of each clock is shaded in the space below using the words *quarter*, *quarters*, *half*, or *halves*.









2. Write the time shown on each clock.

a.



b.



c.



d.



Time Worksheets (Half & Quarter Hour)

1.


Tell what fraction of each clock is shaded in the space below using the words *quarter*, *quarters*, *half*, or *halves*.



1 quarter



1 half
2 quarters



3 quarters



2 halves
4 quarters

2. Write the time shown on each clock.

a.



6:00

b.



6:15

c.



3:30

d.



9:30