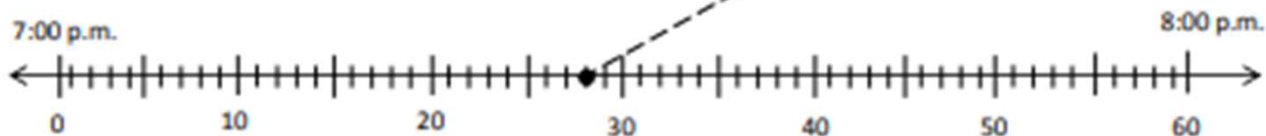


# Tell Time using Number Line Worksheets

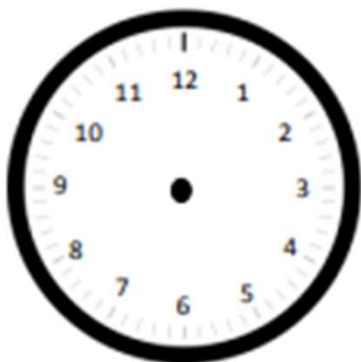
Name \_\_\_\_\_

Date \_\_\_\_\_

1. Plot a point on the number line for the times shown on the clocks below. Then draw a line to match the clocks to the points.



2. Jessie woke up this morning at 6:48 a.m. Draw hands on the clock below to show what time Jessie woke up.

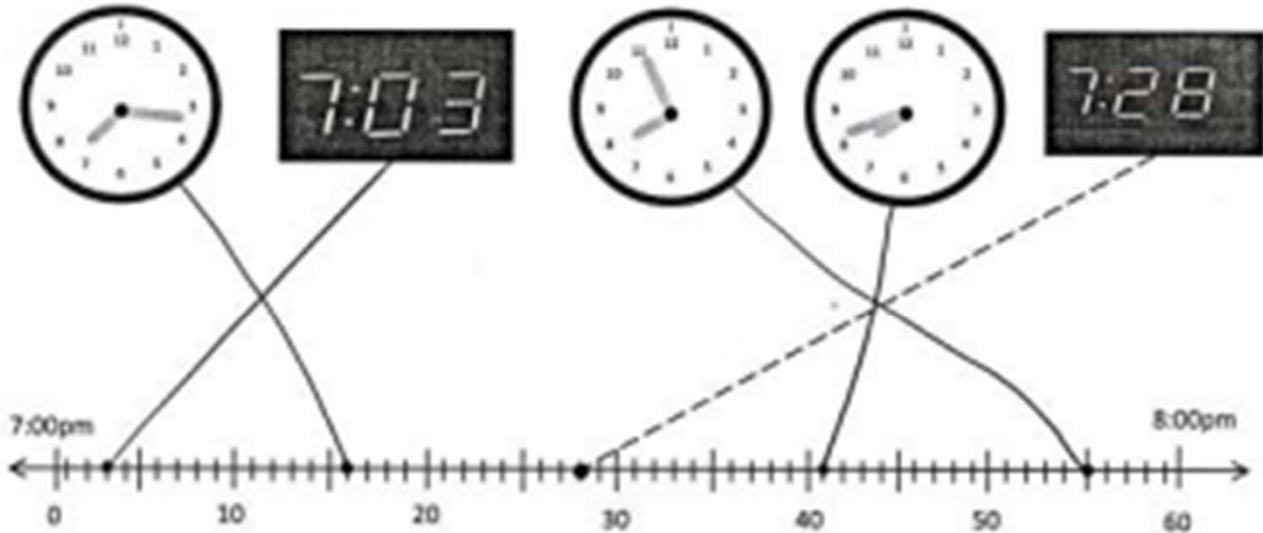


3. Mrs. Barnes starts teaching math at 8:23 a.m. Draw hands on the clock below to show what time Mrs. Barnes starts teaching math.



## Tell Time using Number Line Worksheets

1. Plot a point on the number line for the times shown on the clocks below. Then draw a line to match the clocks to the points.



2. Jessie woke up this morning at 6:48 a.m. Draw hands on the clock below to show what time Jessie woke up.



3. Mrs. Barnes starts teaching math at 8:23 a.m. Draw hands on the clock below to show what time Mrs. Barnes starts teaching math.

