

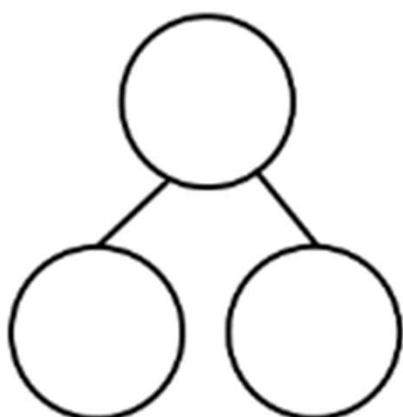
Learning Subtraction Worksheets (Take Away from 9)

Name _____

Date _____


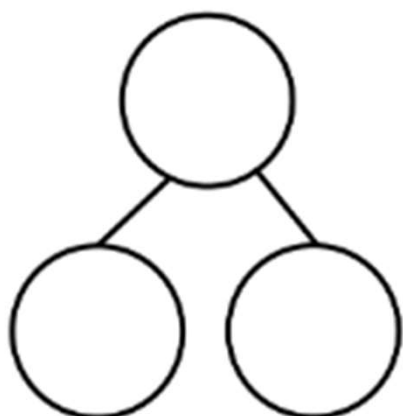
Cross off the part that goes away. Fill in the number bond and number sentence.

Mary had 9 library books. She returned 1 book to the library. How many books are left?



$$\underline{\quad} - \underline{\quad} = \underline{\quad}$$

There were 9 lunch bags. 3 bags were thrown away. How many bags are there now?



$$\underline{\quad} - \underline{\quad} = \underline{\quad}$$

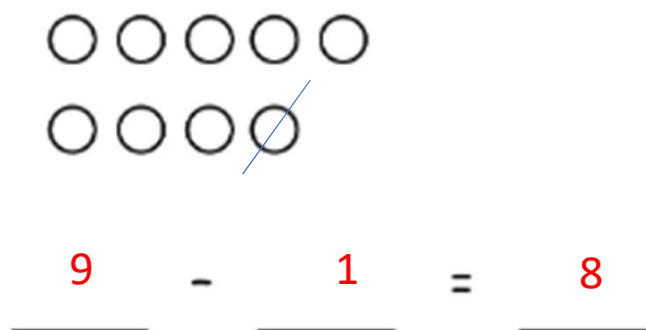
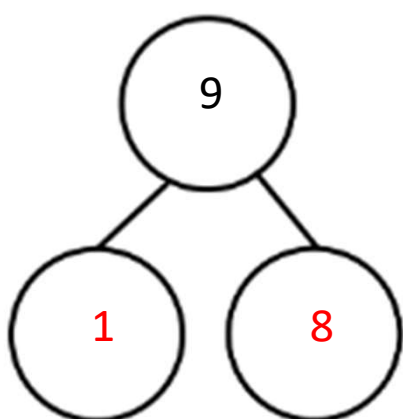
Learning Subtraction Worksheets (Take Away from 9)

Name _____

Date _____

Cross off the part that goes away. Fill in the number bond and number sentence.

Mary had 9 library books. She returned 1 book to the library. How many books are left?



There were 9 lunch bags. 3 bags were thrown away. How many bags are there now?

