

Learning Subtraction Worksheets (Take Away from 8)

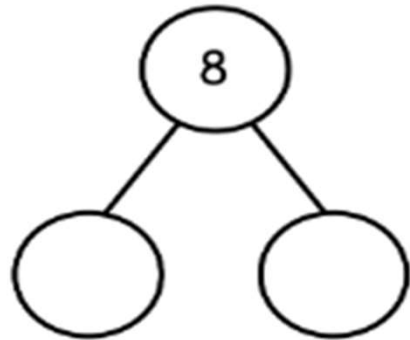
Name _____

Date _____

Fill in the number sentences and number bonds.

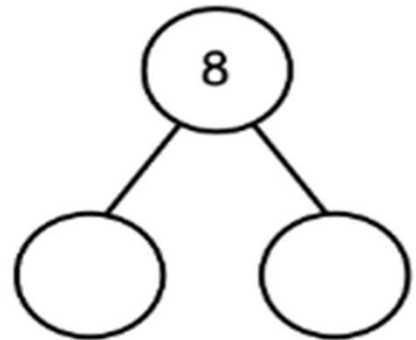
8 take away 1

$$\boxed{8} - \boxed{} = \boxed{}$$



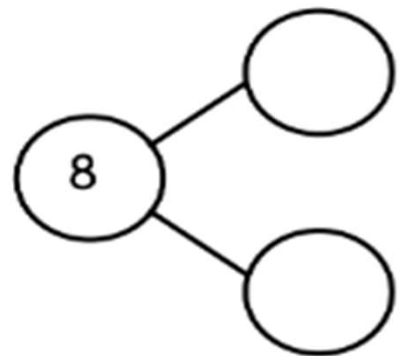
8 take away 7

$$\boxed{8} - \boxed{} = \boxed{}$$



8 take away 2

$$\boxed{8} - \boxed{} = \boxed{}$$



Learning Subtraction Worksheets (Take Away from 8)

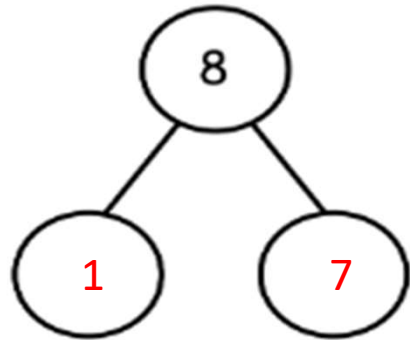
Name _____

Date _____

Fill in the number sentences and number bonds.

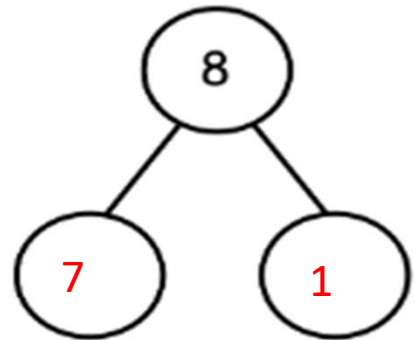
8 take away 1

$$\boxed{8} - \boxed{1} = \boxed{7}$$



8 take away 7

$$\boxed{8} - \boxed{7} = \boxed{1}$$



8 take away 2

$$\boxed{8} - \boxed{2} = \boxed{6}$$

