

# Learning Subtraction Worksheets (Take Away from 7)

Name \_\_\_\_\_

Date \_\_\_\_\_

Fill in the number sentence and number bond.

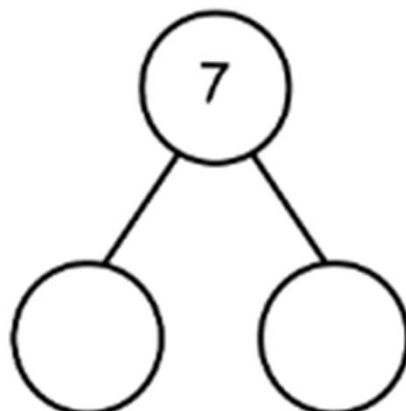
Cross out 5 dots.



7

-

=

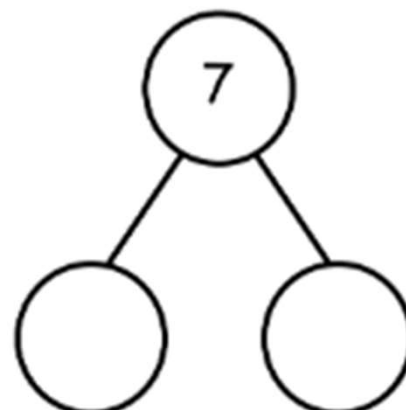


Draw 7 dots. Cross out 3 dots.

7

-

=




Draw 7 dots in a 5-group like the first problem.

Cross out 4 dots.

7

-

=



# Learning Subtraction Worksheets (Take Away from 7)

Name \_\_\_\_\_

Date \_\_\_\_\_

Fill in the number sentence and number bond.

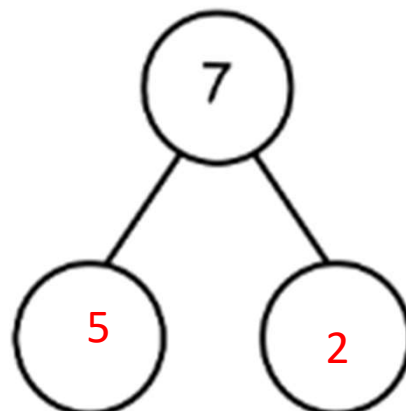
Cross out 5 dots.



7

-

=



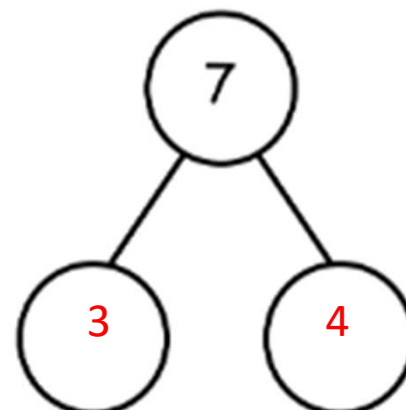
Draw 7 dots. Cross out 3 dots.



7


-

=



Draw 7 dots in a 5-group like the first problem.

Cross out 4 dots.



7

-

=

