


Learning Subtraction Worksheets (Take Away from 6)

Name _____

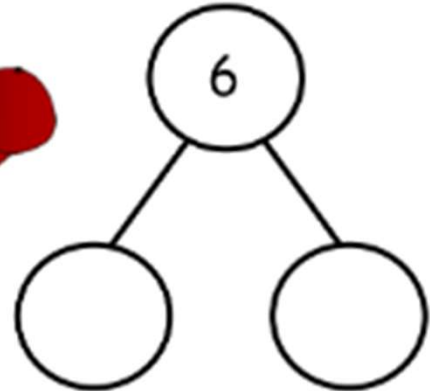
Date _____

Fill in the number sentences and the number bonds.


Take away 3 hats.



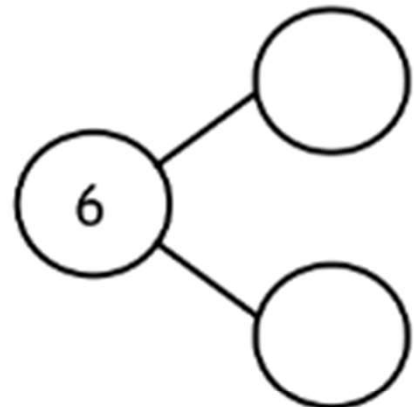
$$\boxed{6} - \boxed{} = \boxed{}$$



Take away 4 cubes.

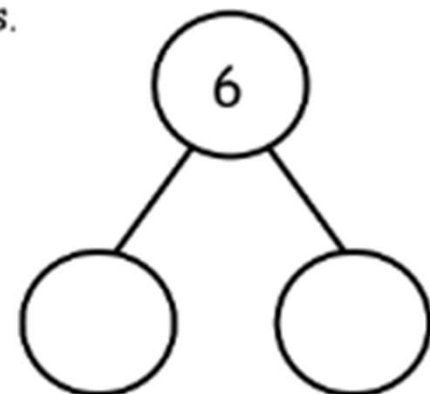


$$\boxed{6} - \boxed{} = \boxed{}$$



Draw 6 circles in a 5-group. Take away 2 circles.

$$\boxed{} - \boxed{} = \boxed{}$$



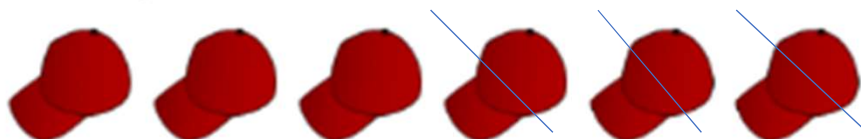
Learning Subtraction Worksheets (Take Away from 6)

Name _____

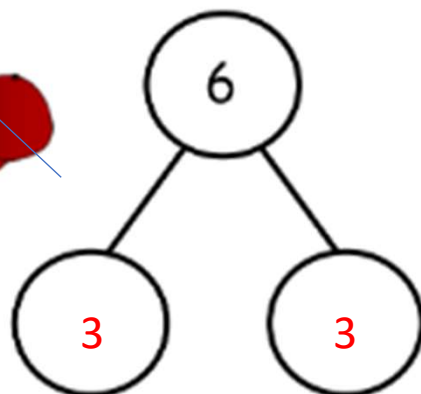
Date _____

Fill in the number sentences and the number bonds.

Take away 3 hats.



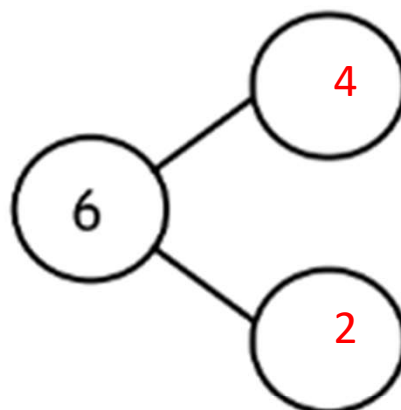
$$\boxed{6} - \boxed{3} = \boxed{3}$$




Take away 4 cubes.



$$\boxed{6} - \boxed{4} = \boxed{2}$$



Draw 6 circles. Take away 2 circles.



$$\boxed{6} - \boxed{2} = \boxed{4}$$

