

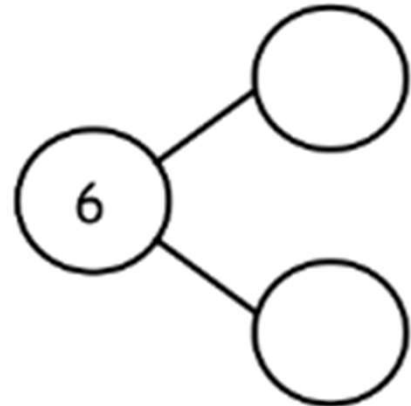

# Learning Subtraction Worksheets (Take Away from 6)

Name \_\_\_\_\_

Date \_\_\_\_\_

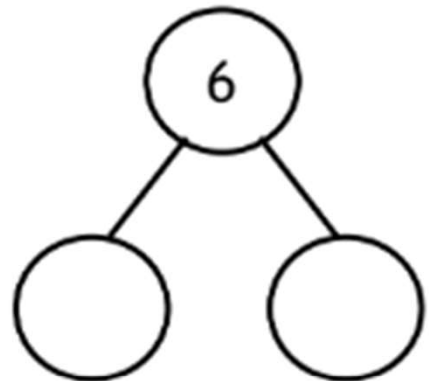
Fill in the number bonds.

Cross out 1 hat.



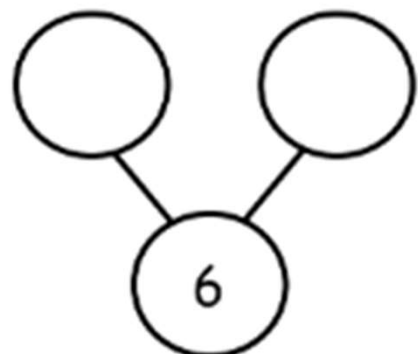
$$6 - 1 = 5$$

Cross out 5 snowflakes.



$$6 - 5 = 1$$

Cross out 2 snowflakes.



$$6 - 2 = 4$$


# Learning Subtraction Worksheets (Take Away from 6)

Name \_\_\_\_\_

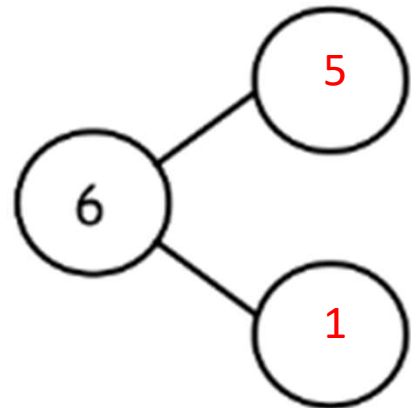
Date \_\_\_\_\_

Fill in the number bonds.


Cross out 1 hat.



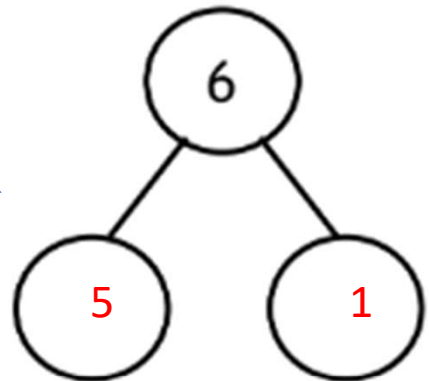
$$6 - 1 = 5$$



Cross out 5 snowflakes.



$$6 - 5 = 1$$



Cross out 2 snowflakes.



$$6 - 2 = 4$$

