


# Learning Subtraction Worksheets (Take Away from 10)

Name \_\_\_\_\_


Date \_\_\_\_\_

Fill in the number sentence and the number bond.

There were 10 teddy bears. Cross out 2 bears. There are 8 bears left.



$$\underline{10} - \underline{\quad} = \underline{\quad}$$




---

There were 10 teddy bears. Cross out 9. There is 1 left.



$$\underline{\quad} - \underline{\quad} = \underline{\quad}$$



---

There were 10 teddy bears. Cross out 3. There are 7 bears left.



$$\underline{\quad} - \underline{\quad} = \underline{\quad}$$


# Learning Subtraction Worksheets (Take Away from 10)

Name \_\_\_\_\_

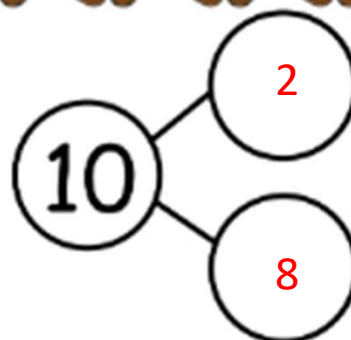
Date \_\_\_\_\_

Fill in the number sentence and the number bond.

There were 10 teddy bears. Cross out 2 bears. There are 8 bears left.




$$\underline{10} - \underline{2} = \underline{8}$$

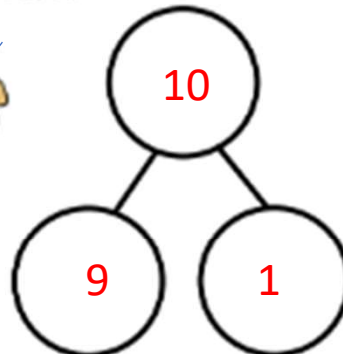


---

There were 10 teddy bears. Cross out 9. There is 1 left.




$$\underline{10} - \underline{9} = \underline{1}$$



---

There were 10 teddy bears. Cross out 3. There are 7 bears left.



$$\underline{10} - \underline{3} = \underline{7}$$