

## Learning Subtraction Worksheets (How Many Are Left?)

Name \_\_\_\_\_

Date \_\_\_\_\_

The cat ate 3 mice. Cross out 3 mice. Write how many mice are left.



The fish ate 2 worms. Cross out 2 worms. Write how many worms are left.



The frog ate 5 flies. Cross out 5 flies. Write how many flies are left.



The monkey ate 4 bananas. Cross out 4 bananas. Write how many bananas are left.





# Learning Subtraction Worksheets (How Many Are Left?)

Name \_\_\_\_\_

Date \_\_\_\_\_

The cat ate 3 mice. Cross out 3 mice. Write how many mice are left.




1

The fish ate 2 worms. Cross out 2 worms. Write how many worms are left.



3

The frog ate 5 flies. Cross out 5 flies. Write how many flies are left.



2

The monkey ate 4 bananas. Cross out 4 bananas. Write how many bananas are left.



4