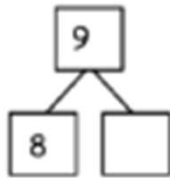


Subtract from 9 Worksheets

Use 5-group drawings to help you complete the number bond. Match the number bond to the related subtraction sentence. Write the other related subtraction number sentence.

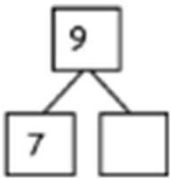
a.



$9 - 5 = \underline{\quad}$

$\underline{\quad} - \underline{\quad} = \underline{\quad}$

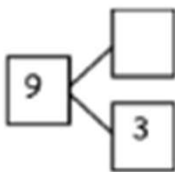
b.



$9 - 1 = \underline{\quad}$

$\underline{\quad} - \underline{\quad} = \underline{\quad}$

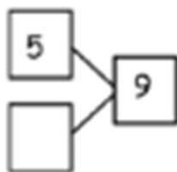
c.



$9 - 2 = \underline{\quad}$

$\underline{\quad} - \underline{\quad} = \underline{\quad}$

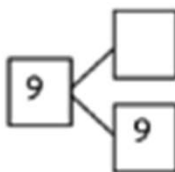
d.



$9 - 6 = \underline{\quad}$

$\underline{\quad} - \underline{\quad} = \underline{\quad}$

e.



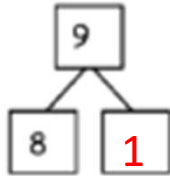
$9 - \underline{\quad} = 0$

$\underline{\quad} - \underline{\quad} = \underline{\quad}$

Subtract from 9 Worksheets

Use 5-group drawings to help you complete the number bond. Match the number bond to the related subtraction sentence. Write the other related subtraction number sentence.

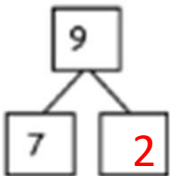
a.



$9 - 5 = \underline{\quad}$

$\underline{\quad} - \underline{\quad} = \underline{\quad}$

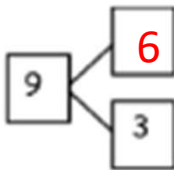
b.



$9 - 1 = \underline{\quad}$

$\underline{\quad} - \underline{\quad} = \underline{\quad}$

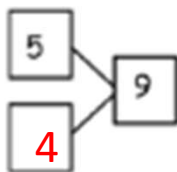
c.



$9 - 2 = \underline{\quad}$

$\underline{\quad} - \underline{\quad} = \underline{\quad}$

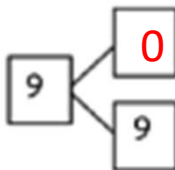
d.



$9 - 6 = \underline{\quad}$

$\underline{\quad} - \underline{\quad} = \underline{\quad}$

e.



$9 - \underline{\quad} = 0$

$\underline{\quad} - \underline{\quad} = \underline{\quad}$