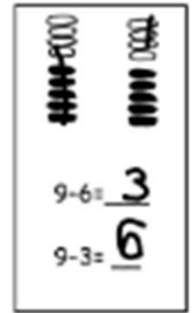


Subtract from 9 Worksheets

Make 5-group drawings and solve. Use the first number sentence to help you write a related number sentence that matches your picture.



1.

2.

3.

$$9 - 2 = \underline{7}$$

$$9 - 8 = \underline{\quad}$$

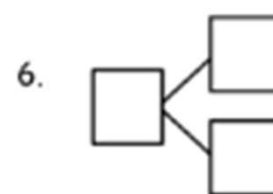
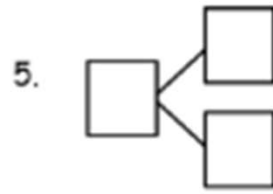
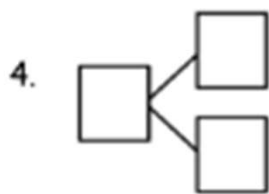
$$9 - 4 = \underline{\quad}$$

$$\underline{\quad} - \underline{\quad} = \underline{\quad}$$

$$\underline{\quad} - \underline{\quad} = \underline{\quad}$$

$$\underline{\quad} - \underline{\quad} = \underline{\quad}$$

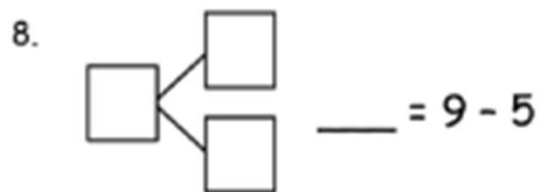
Subtract. Then, write the related subtraction sentence. Make a math drawing if needed, and complete a number bond for each.



$$9 - 7 = \underline{\quad}$$

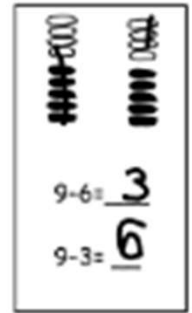
$$9 - \underline{\quad} = 9$$

$$9 - \underline{\quad} = 6$$



Subtract from 9 Worksheets

Make 5-group drawings and solve. Use the first number sentence to help you write a related number sentence that matches your picture.



1.

2.

3.

$$9 - 2 = \underline{7}$$

$$9 - 8 = \underline{1}$$

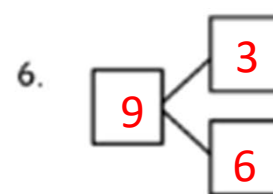
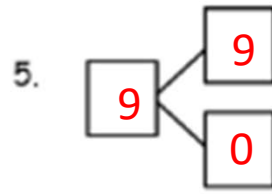
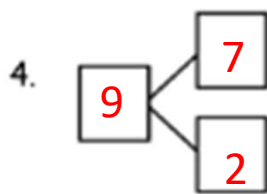
$$9 - 4 = \underline{5}$$

$$\underline{9} - \underline{7} = \underline{2}$$

$$\underline{9} - \underline{1} = \underline{8}$$

$$\underline{9} - \underline{5} = \underline{4}$$

Subtract. Then, write the related subtraction sentence. Make a math drawing if needed, and complete a number bond for each.



$$9 - 7 = \underline{2}$$

$$9 - \underline{0} = 9$$

$$9 - \underline{3} = 6$$

$$\underline{9 - 2 = 7}$$

$$\underline{9 - 0 = 9}$$

$$\underline{9 - 6 = 3}$$

