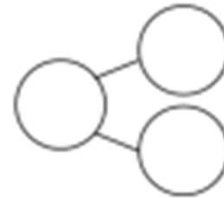


Subtract 9 for 1st Grade Worksheets

Circle 10 and subtract. Make a number bond.



1. $15 - 9 = \underline{\quad}$



Draw and circle 10. Subtract and make a number bond.

2. $14 - 9 = \underline{\quad}$

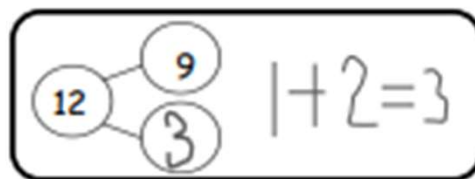
3. $12 - 9 = \underline{\quad}$

4. $13 - 9 = \underline{\quad}$

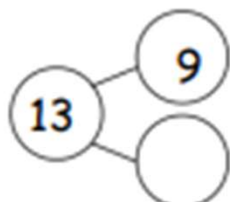
5. $16 - 9 = \underline{\quad}$

Subtract 9 for 1st Grade Worksheets

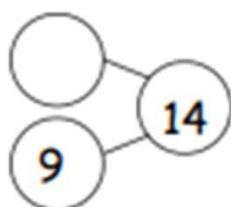
Complete the number bond and write the number sentence that helped you.



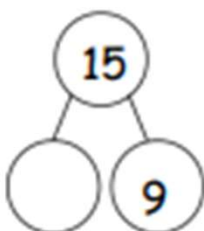
a.



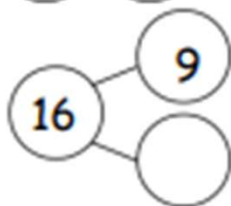
b.



c.



d.

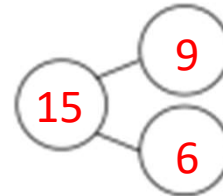


Subtract 9 for 1st Grade Worksheets

Circle 10 and subtract. Make a number bond.



1. $15 - 9 = \underline{\quad}$



Draw and circle 10. Subtract and make a number bond.

2. $14 - 9 = \underline{5}$

3. $12 - 9 = \underline{3}$

4. $13 - 9 = \underline{4}$

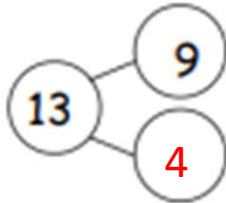
5. $16 - 9 = \underline{7}$

Subtract 9 for 1st Grade Worksheets

Complete the number bond and write the number sentence that helped you.

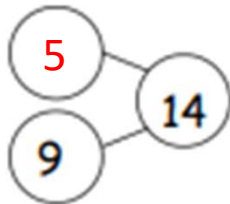


a.



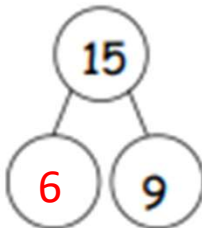
$$\underline{1 + 3 = 4}$$

b.



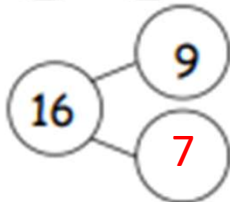
$$\underline{1 + 4 = 5}$$

c.



$$\underline{1 + 5 = 6}$$

d.



$$\underline{1 + 6 = 7}$$