



Subtract 9 for 1st Grade Worksheets

1. Match the pictures with the number sentences.


a. $11 - 9 = 2$




b. $14 - 9 = 5$




c. $16 - 9 = 7$



d. $18 - 9 = 9$



e. $17 - 9 = 8$



Circle 10 and subtract.

2. $12 - 9 = \underline{\quad}$



3. $14 - 9 = \underline{\quad}$



Subtract 9 for 1st Grade Worksheets

4. $15 - 9 = \underline{\quad}$



5. $13 - 9 = \underline{\quad}$



6. $16 - 9 = \underline{\quad}$



7. $17 - 9 = \underline{\quad}$



Draw and **circle** 10. Then subtract.

8. $12 - 9 = \underline{\quad}$

9. $13 - 9 = \underline{\quad}$

10. $14 - 9 = \underline{\quad}$

11. $15 - 9 = \underline{\quad}$


Subtract 9 for 1st Grade Worksheets

1. Match the pictures with the number sentences.

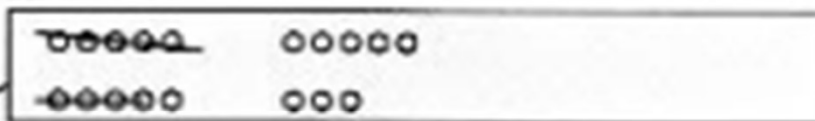
a. $11 - 9 = 2$




b. $14 - 9 = 5$




c. $16 - 9 = 7$



d. $18 - 9 = 9$

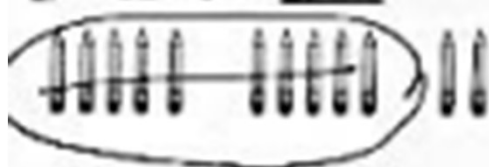


e. $17 - 9 = 8$

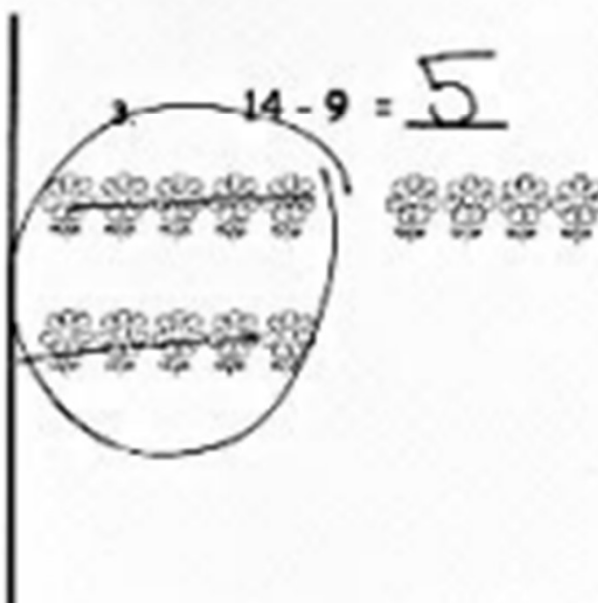


Circle 10 and subtract.

2. $12 - 9 = \underline{3}$




3. $14 - 9 = \underline{5}$




Subtract 9 for 1st Grade Worksheets


4. $15 - 9 = \underline{6}$



5. $13 - 9 = \underline{4}$



6. $16 - 9 = \underline{7}$

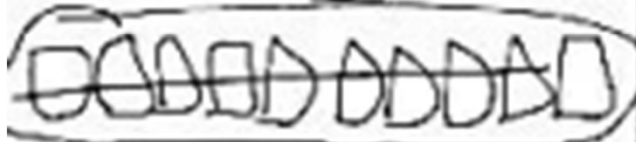


7. $17 - 9 = \underline{8}$



Draw and circle 10. Then subtract.


8. $12 - 9 = \underline{3}$



10. $14 - 9 = \underline{5}$



9. $13 - 9 = \underline{4}$



11. $15 - 9 = \underline{6}$

