


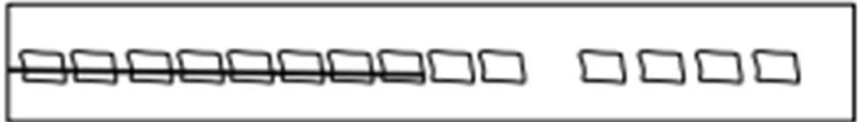
## Subtract 8 (1<sup>st</sup> Grade Worksheets)

1. Match the pictures with the number sentences.

a.  $12 - 8 = 4$




b.  $17 - 8 = 9$



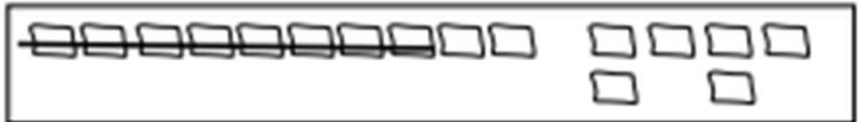
c.  $16 - 8 = 8$



d.  $18 - 8 = 10$



e.  $14 - 8 = 6$



Circle 10 and subtract.

2.  $13 - 8 = \underline{\quad}$



3.  $11 - 8 = \underline{\quad}$



## Subtract 8 (1<sup>st</sup> Grade Worksheets)

4.  $15 - 8 = \underline{\quad}$



6.  $16 - 8 = \underline{\quad}$



5.  $19 - 8 = \underline{\quad}$



7.  $17 - 8 = \underline{\quad}$



Draw and circle 10, or break apart the teen number with a number bond. Then subtract.

8.  $12 - 8 = \underline{\quad}$

9.  $13 - 8 = \underline{\quad}$

10.  $14 - 8 = \underline{\quad}$

11.  $15 - 8 = \underline{\quad}$

# Subtract 8 (1<sup>st</sup> Grade Worksheets)

1. Match the pictures with the number sentences.

a.  $12 - 8 = 4$

b.  $17 - 8 = 9$

c.  $16 - 8 = 8$

d.  $18 - 8 = 10$

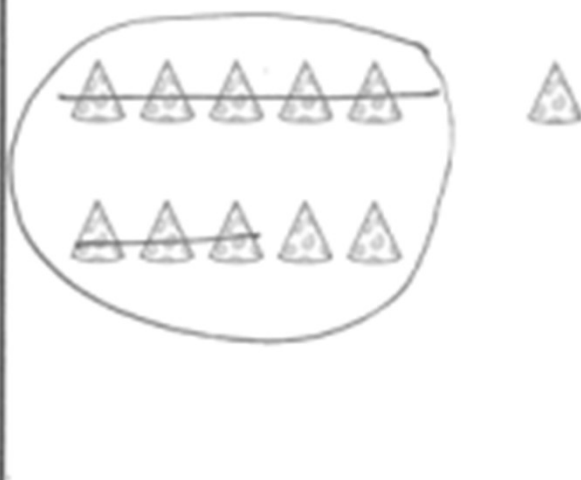
e.  $14 - 8 = 6$

Circle 10 and subtract.

2.  $13 - 8 = 5$

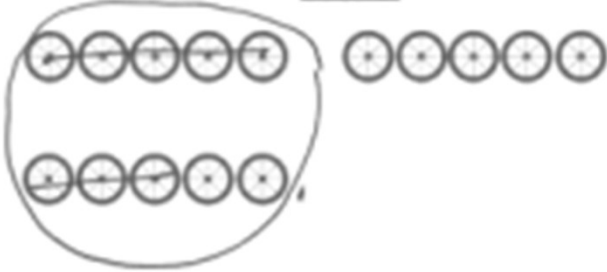


3.  $11 - 8 = 3$



## Subtract 8 (1<sup>st</sup> Grade Worksheets)

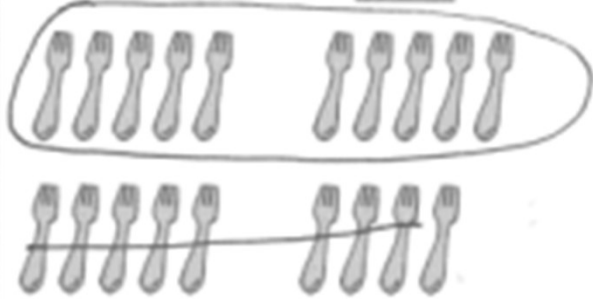
4.  $15 - 8 = \underline{7}$



6.  $16 - 8 = \underline{8}$



5.  $19 - 8 = \underline{11}$



7.  $17 - 8 = \underline{9}$



Draw and circle 10, or break apart the teen number with a number bond. Then subtract.

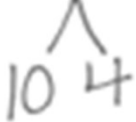
8.  $12 - 8 = \underline{4}$



9.  $13 - 8 = \underline{5}$



10.  $14 - 8 = \underline{6}$



11.  $15 - 8 = \underline{7}$

