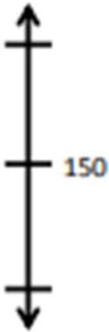







# Rounding Worksheets

Name \_\_\_\_\_

Date \_\_\_\_\_

1. Round to the nearest hundred. Use the number line to model your thinking.

a. $143 =$ _____ 	b. $286 =$ _____ 
c. $320 =$ _____ 	d. $1,320 =$ _____ 
e. $1,572 =$ _____ 	f. $1,250 =$ _____ 

# Rounding Worksheets

Round to the nearest hundred. Use the number line to model your thinking.

a.  $143 \approx \underline{100}$



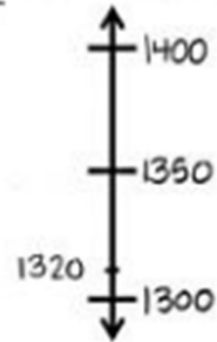
b.  $286 \approx \underline{300}$



c.  $320 \approx \underline{300}$



d.  $1320 \approx \underline{1300}$



e.  $1572 \approx \underline{1600}$



f.  $1250 \approx \underline{1300}$

