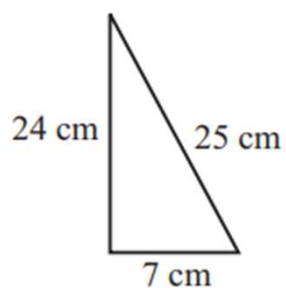
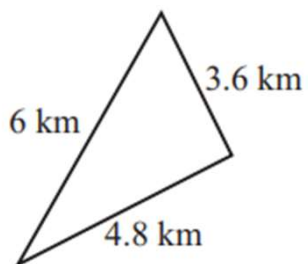
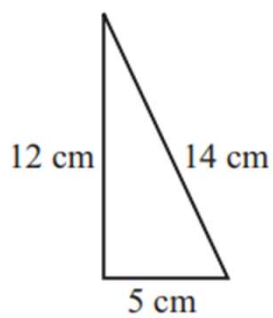
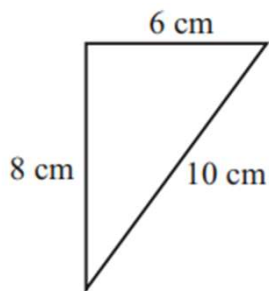


## Pythagorean Theorem Worksheets

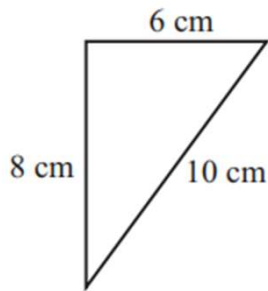
Use Pythagorean theorem to determine which of the following triangles are right triangles.



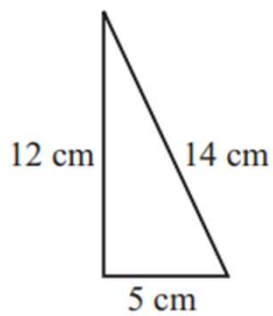
Go to [onlinemathlearning.com](https://www.onlinemathlearning.com) for more free math resources

## Pythagorean Theorem Worksheets

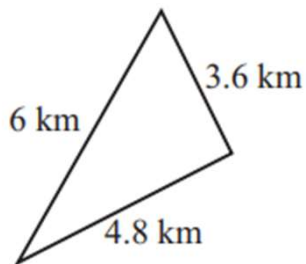
Use Pythagorean theorem to determine which of the following triangles are right triangles.



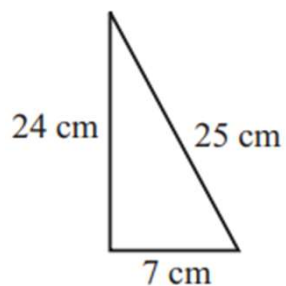
Right Triangle



Not Right Triangle



Right Triangle



Right Triangle