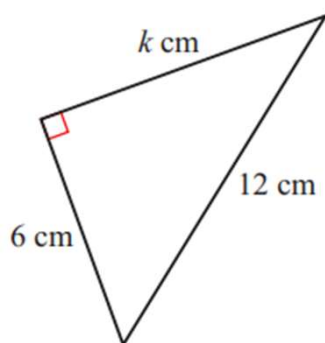
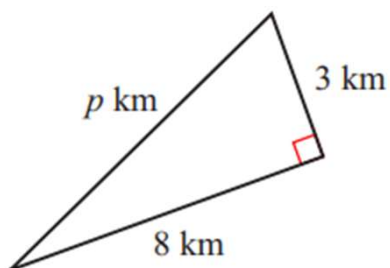
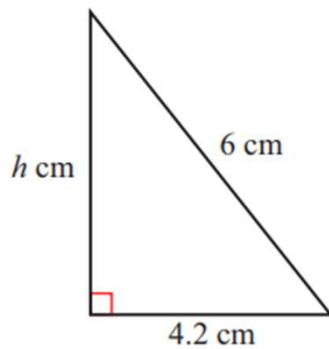
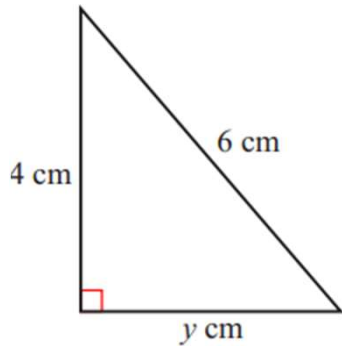


## Pythagorean Theorem Worksheets

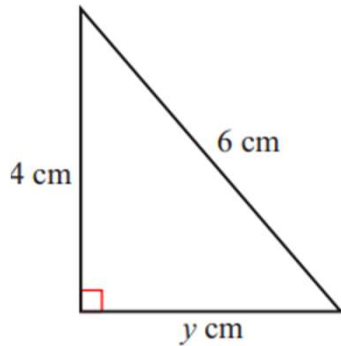
Find the values of the unknown lengths in each of the following triangles. Give your answer correct to three significant figures.



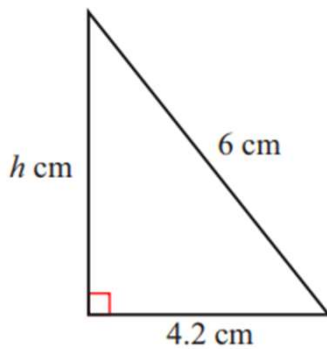
Go to [onlinemathlearning.com](https://www.onlinemathlearning.com) for more free math resources

## Pythagorean Theorem Worksheets

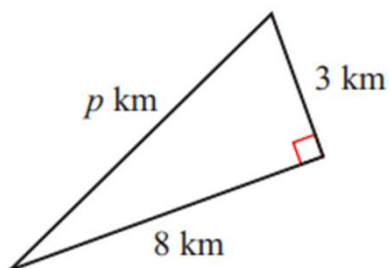
Find the values of the unknown lengths in each of the following triangles. Give your answer correct to three significant figures.



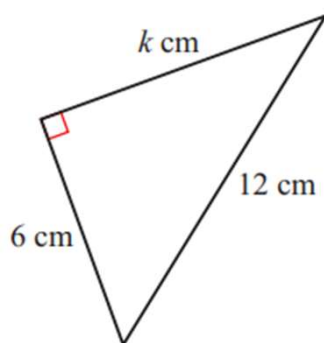
$$y = 4.47 \text{ cm}$$



$$h = 4.28 \text{ cm}$$



$$p = 8.54 \text{ km}$$



$$k = 10.4 \text{ cm}$$

Go to [onlinemathlearning.com](http://onlinemathlearning.com) for more free math resources