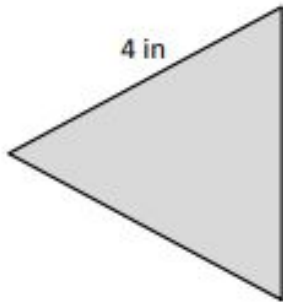


Perimeter

Find the perimeter of each regular shape.

a.



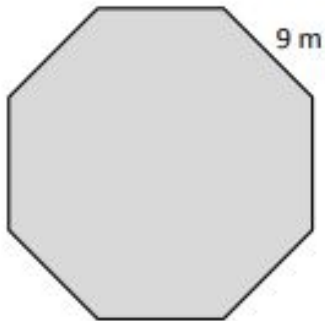
Perimeter = _____ in

b.



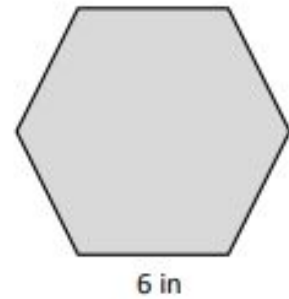
Perimeter = _____ cm

c.



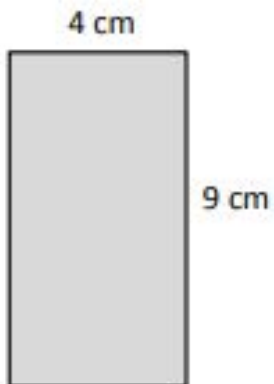
Perimeter = _____ m

d.



Perimeter = _____ in

Find the perimeter of the rectangle.

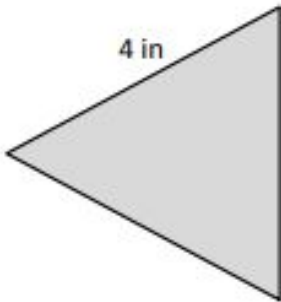


Perimeter = _____ cm

Perimeter

Find the perimeter of each regular shape.

a.



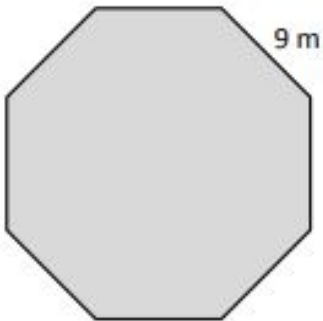
Perimeter = 12 in

b.



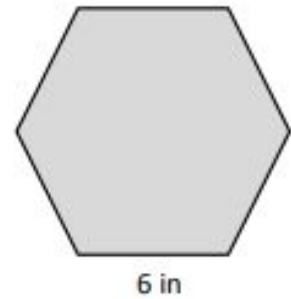
Perimeter = 32 cm

c.



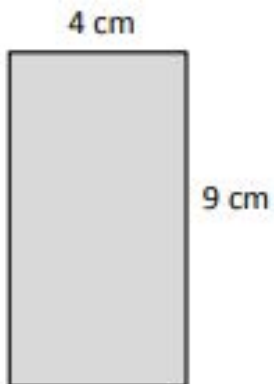
Perimeter = 56 m

d.



Perimeter = 36 in

Find the perimeter of the rectangle.



Perimeter = 26 cm