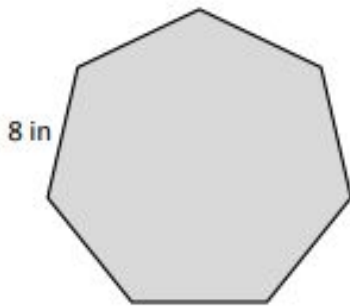


Perimeter

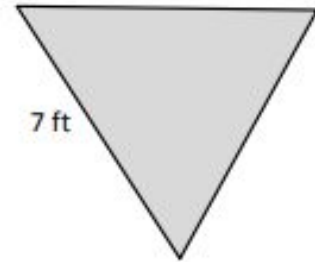
Find the perimeter of each regular shape.

a.



Perimeter = _____ in

b.



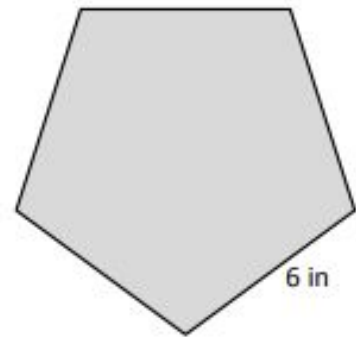
Perimeter = _____ ft

c.



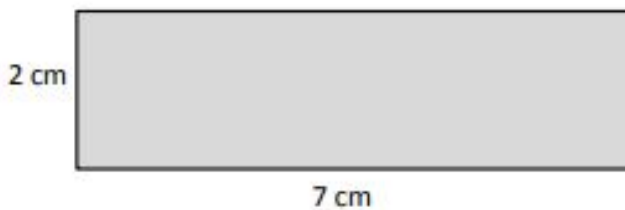
Perimeter = _____ m

d.



Perimeter = _____ in

Find the perimeter of the rectangle.

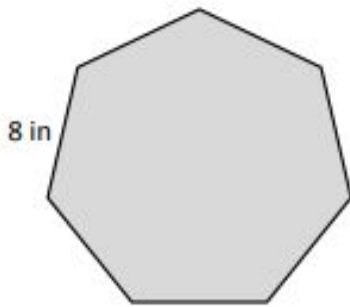


Perimeter = _____ cm

Perimeter

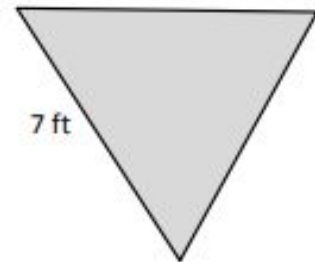
Find the perimeter of each regular shape.

a.



Perimeter = 56 in

b.



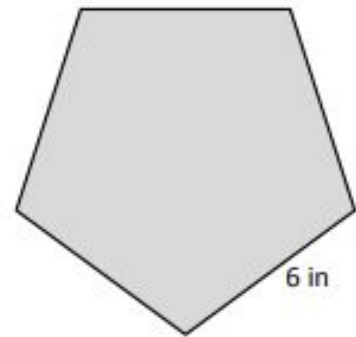
Perimeter = 21 ft

c.



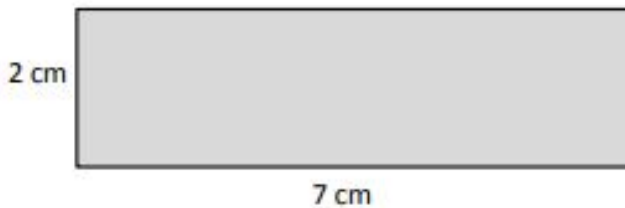
Perimeter = 36 m

d.



Perimeter = 30 in

Find the perimeter of the rectangle.



Perimeter = 18 cm