


## “Make 10” Worksheets

Name \_\_\_\_\_

Date \_\_\_\_\_

Look at the 5-group cards. Draw dots to make 10. Fill in the number sentences.



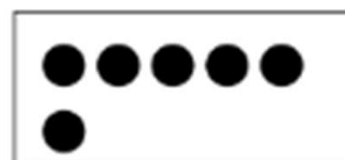
$$\square + \square = 10$$



$$\square + \square = 10$$



$$\square + \square = 10$$



$$\square + \square = 10$$



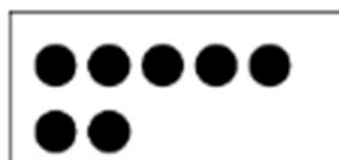
$$\square + \square = 10$$



$$\square + \square = 10$$



$$\square + \square = 10$$



$$\square + \square = 10$$

## “Make 10” Worksheets

Name \_\_\_\_\_

Date \_\_\_\_\_

Look at the 5-group cards. Draw dots to make 10. Fill in the number sentences.




$$\boxed{8} + \boxed{2} = 10$$



$$\boxed{1} + \boxed{9} = 10$$



$$\boxed{5} + \boxed{5} = 10$$




$$\boxed{4} + \boxed{6} = 10$$



$$\boxed{2} + \boxed{8} = 10$$



$$\boxed{3} + \boxed{7} = 10$$



$$\boxed{6} + \boxed{4} = 10$$



$$\boxed{7} + \boxed{3} = 10$$