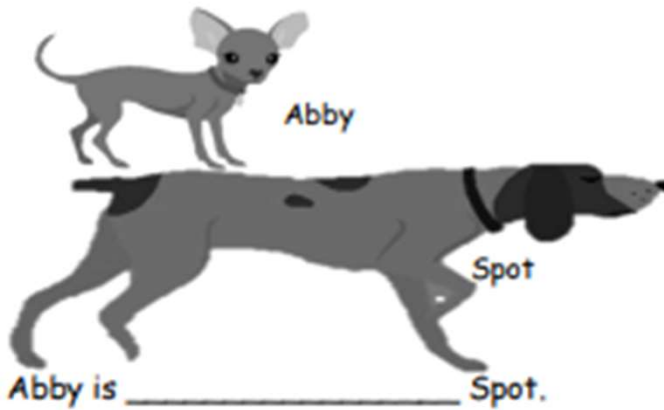


# “Longer or Shorter?” Worksheets

Write the words **longer than** or **shorter than** to make the sentences true.

1.



2.



B is \_\_\_\_\_ A.

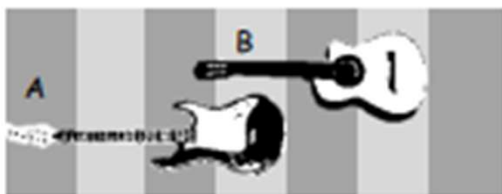
3.



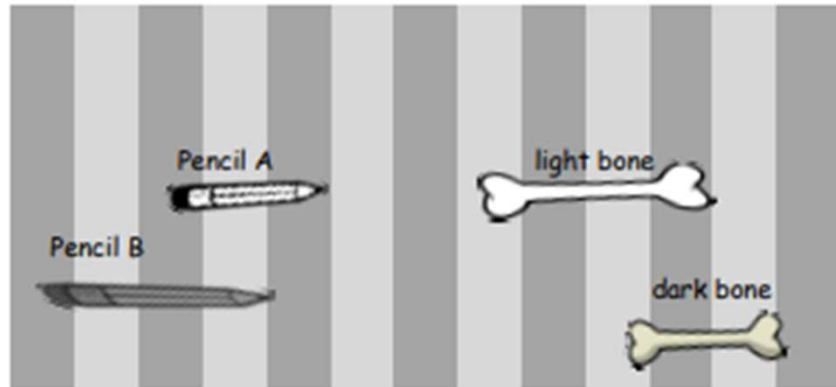
4.



5.



## “Longer or Shorter?” Worksheets



6. Pencil B is \_\_\_\_\_ Pencil A.
7. The dark bone is \_\_\_\_\_ the light bone.
8. Circle true or false.

The light bone is shorter than Pencil A. **True** or **False**

---

9. Find 3 school supplies. Draw them here in order from **shortest** to **longest**. Label each school supply.


## “Longer or Shorter?” Worksheets

Write the words longer than or shorter than to make the sentences true.

1.




2.



3.



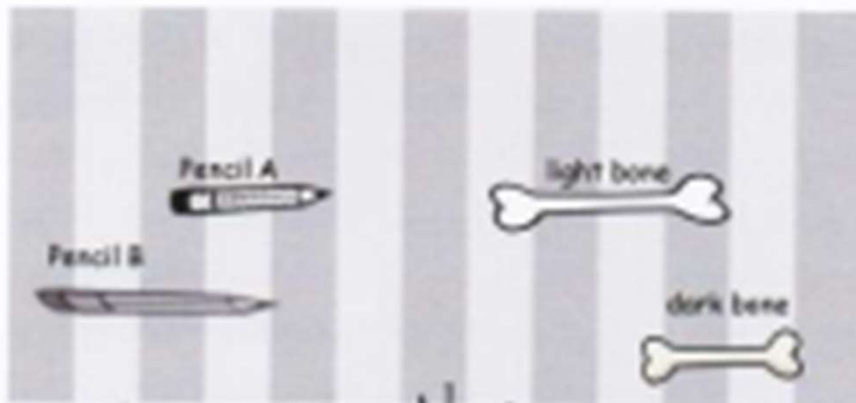
4.



5.



## “Longer or Shorter?” Worksheets



6. Pencil B is longer than Pencil A.

7. The dark bone is shorter than the light bone.

8. Circle true or false.

The light bone is shorter than Pencil A. True or False

9. Find 4 school supplies.

Sketch them here in order from shortest to longest. Label each school supply.

