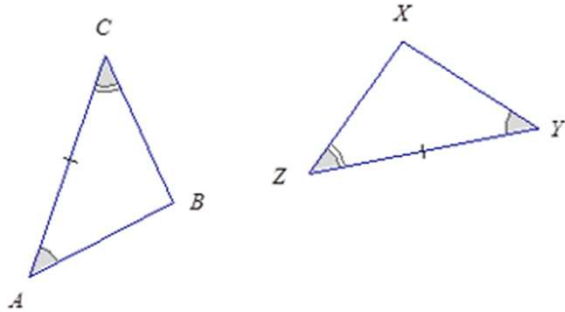


Identify Congruent Triangles Worksheets

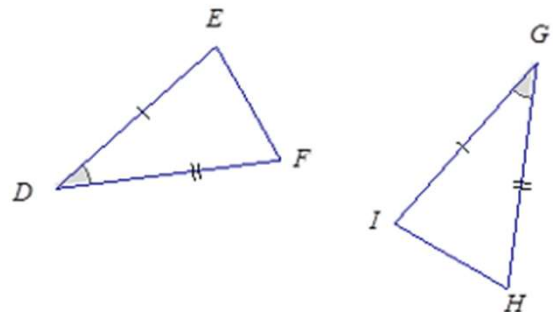
For each pair of triangles, determine if the triangles are congruent, name the triangle congruence and identify the congruence criterion used (SSS, SAS, ASA, AAS, HL).



Congruent: Yes/No

$\triangle ABC \leftrightarrow \triangle$ _____

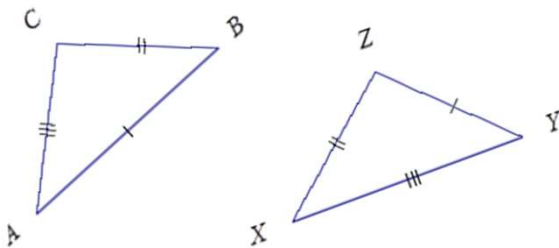
Reason:



Congruent: Yes/No

$\triangle DEF \leftrightarrow \triangle$ _____

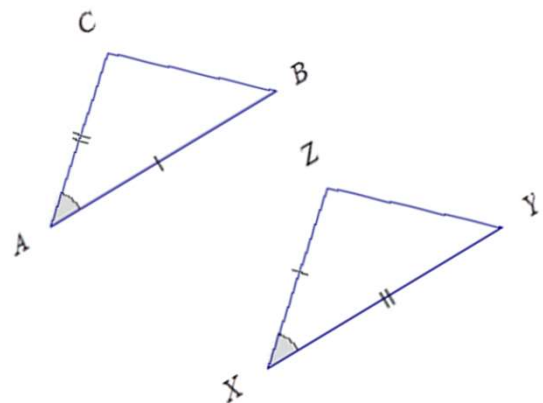
Reason:



Congruent: Yes/No

$\triangle ABC \leftrightarrow \triangle$ _____

Reason:



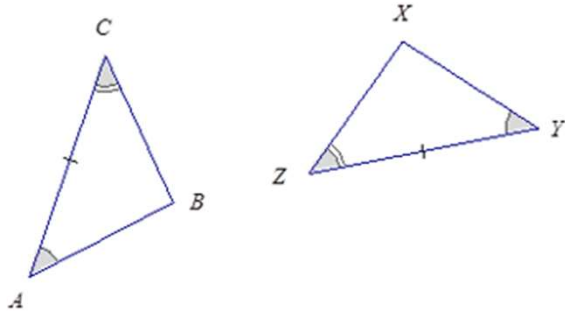
Congruent: Yes/No

$\triangle ABC \leftrightarrow \triangle$ _____

Reason:

Identify Congruent Triangles Worksheets

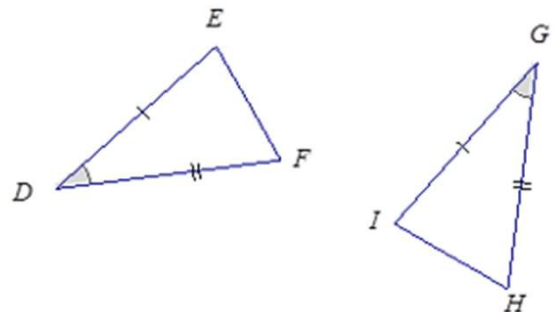
For each pair of triangles, determine if the triangles are congruent, name the triangle congruence and identify the congruence criterion used (SSS, SAS, ASA, AAS, HL).



Congruent: Yes/No

$\triangle ABC \leftrightarrow \triangle YXZ$

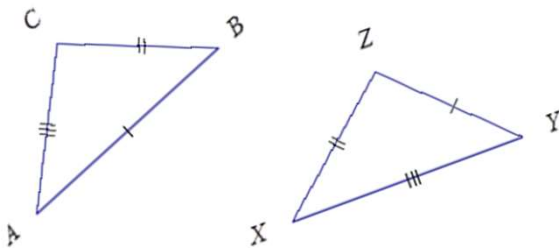
Reason: **ASA**



Congruent: Yes/No

$\triangle DEF \leftrightarrow \triangle GIH$

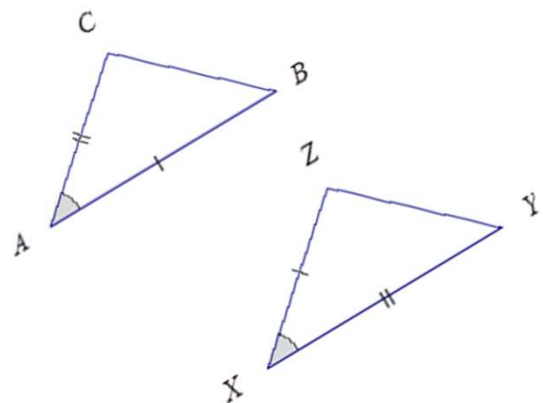
Reason: **SAS**



Congruent: Yes/No

$\triangle ABC \leftrightarrow \triangle YZX$

Reason: **SSS**



Congruent: Yes/No

$\triangle ABC \leftrightarrow \triangle XZY$

Reason: **SAS**