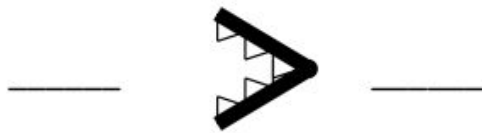


## Greater Than or Less Than

Write the numbers in the blanks so that the alligator is eating the greater number.  
Complete the number sentence that uses *is greater than*, or *is less than*.

31

13



\_\_\_\_\_ is greater than \_\_\_\_\_

23

32



\_\_\_\_\_ is less than \_\_\_\_\_

21


12



\_\_\_\_\_ is less than \_\_\_\_\_

12

10



\_\_\_\_\_ is greater than \_\_\_\_\_

22

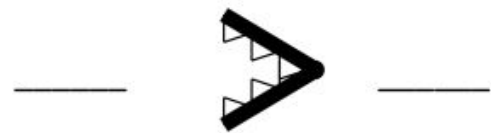
24



\_\_\_\_\_ is less than \_\_\_\_\_

17

25




\_\_\_\_\_ is greater than \_\_\_\_\_

## Greater Than or Less Than


Write the numbers in the blanks so that the alligator is eating the greater number.  
Complete the number sentence that uses *is greater than*, or *is less than*.

31      13

31            13


31 is greater than 13

23      32

23            32


23 is less than 32

21      12

12            21


12 is less than 21

12      10

12            10


12 is greater than 10

22      24

22            24

22 is less than 24

17      25

25            17

25 is greater than 17