

Fraction Worksheets

(Fractions on the Number Line)


1. Locate and label the following fractions on the number line.

$$\frac{0}{6} \quad \frac{6}{6} \quad \frac{12}{6} \quad \frac{3}{6} \quad \frac{9}{6}$$



2. Locate and label the following fractions on the number line.

$$\frac{8}{4} \quad \frac{6}{4} \quad \frac{12}{4} \quad \frac{16}{4} \quad \frac{4}{4}$$



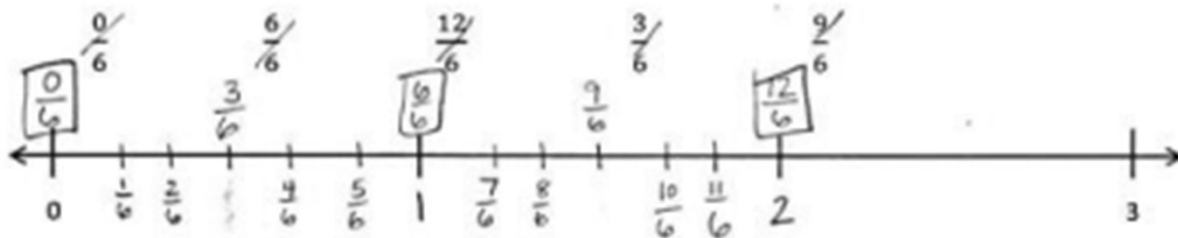
3. Locate and label the following fractions on the number line.

$$\frac{18}{3} \quad \frac{14}{3} \quad \frac{9}{3} \quad \frac{11}{3} \quad \frac{6}{3}$$

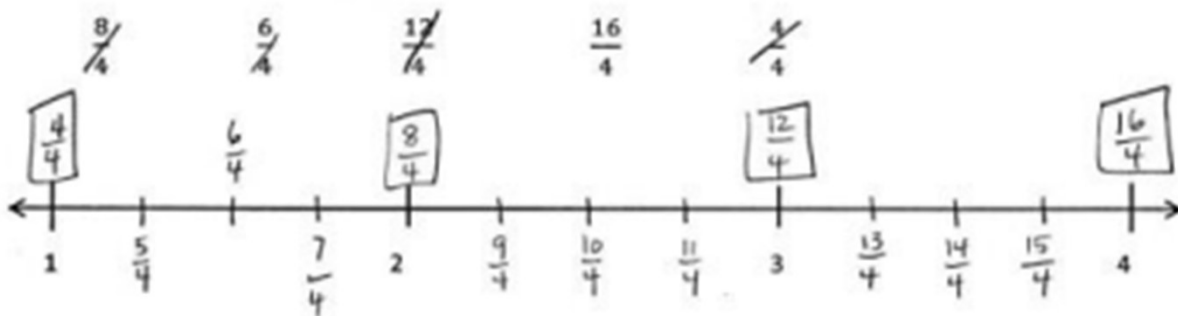


Fraction Worksheets (Fractions on the Number Line)

1. Locate and label the following fractions on the number line.



2. Locate and label the following fractions on the number line.



3. Locate and label the following fractions on the number line.

