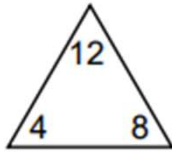


Fact Family Worksheets

Complete each fact family.

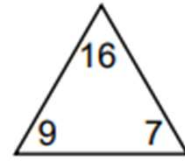


$$\square + \square = \square$$

$$\square + \square = \square$$

$$\square - \square = \square$$

$$\square - \square = \square$$

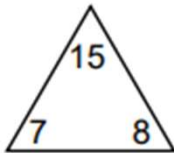


$$\square + \square = \square$$

$$\square + \square = \square$$

$$\square - \square = \square$$

$$\square - \square = \square$$

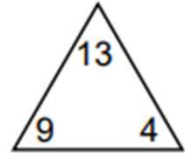


$$\square + \square = \square$$

$$\square + \square = \square$$

$$\square - \square = \square$$

$$\square - \square = \square$$

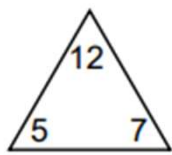


$$\square + \square = \square$$

$$\square + \square = \square$$

$$\square - \square = \square$$

$$\square - \square = \square$$

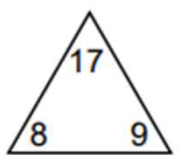


$$\square + \square = \square$$

$$\square + \square = \square$$

$$\square - \square = \square$$

$$\square - \square = \square$$



$$\square + \square = \square$$

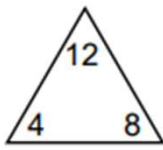
$$\square + \square = \square$$

$$\square - \square = \square$$

$$\square - \square = \square$$

Fact Family Worksheets

Complete each fact family.

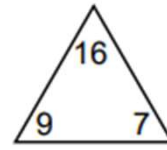


$$\boxed{4} + \boxed{8} = \boxed{12}$$

$$\boxed{8} + \boxed{4} = \boxed{12}$$

$$\boxed{12} - \boxed{8} = \boxed{4}$$

$$\boxed{12} - \boxed{4} = \boxed{8}$$

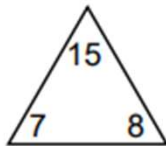


$$\boxed{9} + \boxed{7} = \boxed{16}$$

$$\boxed{7} + \boxed{9} = \boxed{16}$$

$$\boxed{16} - \boxed{7} = \boxed{9}$$

$$\boxed{16} - \boxed{9} = \boxed{7}$$

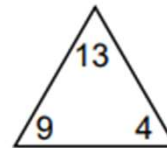


$$\boxed{7} + \boxed{8} = \boxed{15}$$

$$\boxed{8} + \boxed{7} = \boxed{15}$$

$$\boxed{15} - \boxed{8} = \boxed{7}$$

$$\boxed{15} - \boxed{7} = \boxed{8}$$

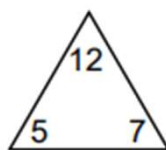


$$\boxed{9} + \boxed{4} = \boxed{13}$$

$$\boxed{4} + \boxed{9} = \boxed{13}$$

$$\boxed{13} - \boxed{4} = \boxed{9}$$

$$\boxed{13} - \boxed{9} = \boxed{4}$$

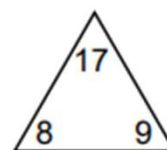


$$\boxed{5} + \boxed{7} = \boxed{12}$$

$$\boxed{7} + \boxed{5} = \boxed{12}$$

$$\boxed{12} - \boxed{7} = \boxed{5}$$

$$\boxed{12} - \boxed{5} = \boxed{7}$$



$$\boxed{8} + \boxed{9} = \boxed{17}$$

$$\boxed{9} + \boxed{8} = \boxed{17}$$

$$\boxed{17} - \boxed{9} = \boxed{8}$$

$$\boxed{17} - \boxed{8} = \boxed{9}$$