

Equal Groups Worksheets

Draw a tape diagram to find the total.

a. $3 + 3 + 3 + 3 = \underline{\quad}$

b. $4 + 4 + 4 = \underline{\quad}$

c. 5 groups of 2


d. 4 groups of 4




Equal Groups Worksheets

Draw a tape diagram to find the total.

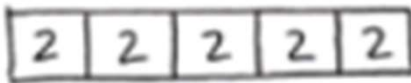
a. $3 + 3 + 3 + 3 = \underline{12}$



b. $4 + 4 + 4 = \underline{12}$

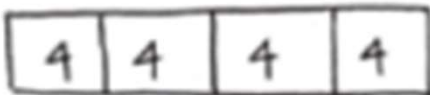


c. 5 groups of 2




$$2 + 2 + 2 + 2 + 2 = 10$$

d. 4 groups of 4



$$4 + 4 + 4 + 4 = 16$$

e. 



$$5 + 5 + 5 = 15$$