


Equal Groups Worksheets


Write a repeated addition equation to match the picture. Then, group addends into pairs, and add to find the total.

a. 

_____ + _____ + _____ + _____ + _____ = _____

_____ + _____ + 3 = _____

_____ + 3 = _____


b. 

_____ + _____ + _____ = _____

_____ + 3 = _____

Equal Groups Worksheets

Write a repeated addition equation to match the picture. Then, group addends into pairs, and add to find the total.



$$\underline{3} + \underline{3} + \underline{3} + \underline{3} + \underline{3} = \underline{15}$$

$$\underline{6} + \underline{6} + 3 = \underline{15}$$

$$\underline{12} + 3 = \underline{15}$$



$$\underline{3} + \underline{3} + \underline{3} = \underline{9}$$

$$\underline{6} + 3 = \underline{9}$$