


## Decompose/Compose 6 Worksheets

Name \_\_\_\_\_

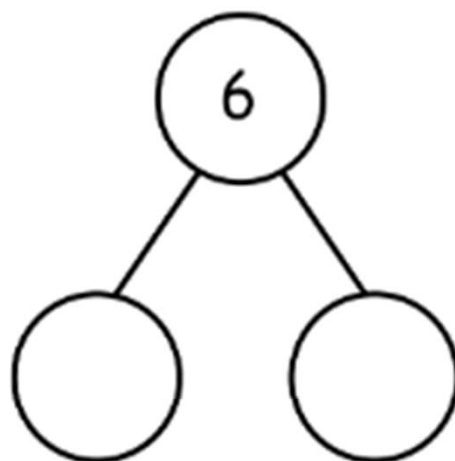
Date \_\_\_\_\_

Fill in the number bond and number sentences.



There are 6 cornstalks. 5 cornstalks are in the first row. 1 cornstalk is in the second.

$$6 = \square + \square$$



---

There are 6 cars on the road. 2 cars are big, and 4 are small.




$$\square \text{ is } \square \text{ and } \square$$
$$\square = \square + \square$$

## Decompose/Compose 6 Worksheets

Name \_\_\_\_\_

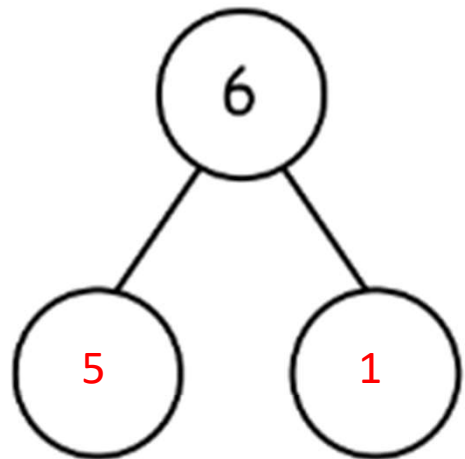
Date \_\_\_\_\_

Fill in the number bond and number sentences.



There are 6 cornstalks. 5 cornstalks are in the first row. 1 cornstalk is in the second.

$$6 = \boxed{5} + \boxed{1}$$



---

There are 6 cars on the road. 2 cars are big, and 4 are small.



$$\boxed{2} \text{ is } \boxed{4} \text{ and } \boxed{6}$$
$$\boxed{6} = \boxed{2} + \boxed{4}$$