

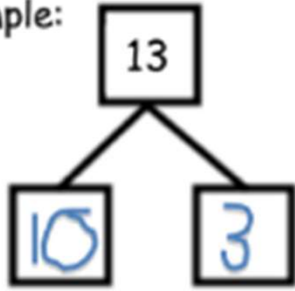
# “Teen Numbers” Worksheets

Name \_\_\_\_\_

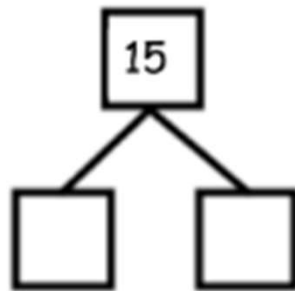
Date \_\_\_\_\_

Fill in each number bond, and write a number sentence to match.

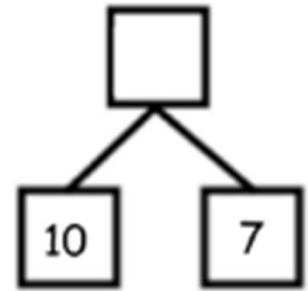
Example:



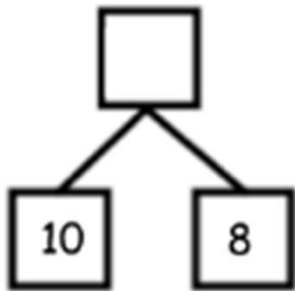
$$13 = 10 + 3$$



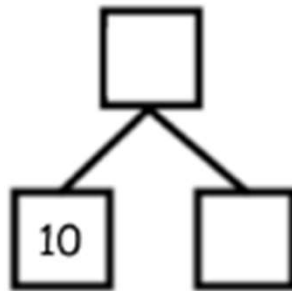
$$15 = \underline{\quad} + \underline{\quad}$$



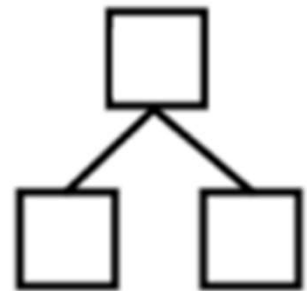
$$17 = \underline{\quad} + \underline{\quad}$$



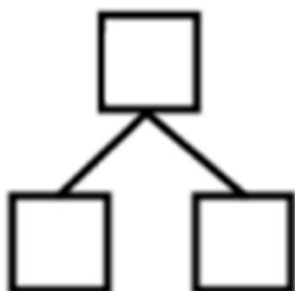
$$10 + 8 = \underline{\quad}$$



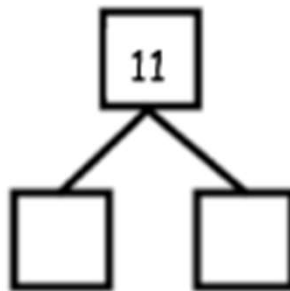
$$10 + 6 = \underline{\quad}$$



$$\underline{\quad} = 10 + 4$$



$$12 = \underline{\quad} + \underline{\quad}$$



$$\underline{\quad} = \underline{\quad} + \underline{\quad}$$

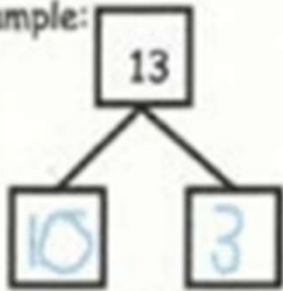
## “Teen Numbers” Worksheets

Name \_\_\_\_\_

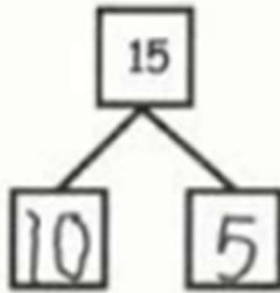
Date \_\_\_\_\_

Fill in each number bond, and write a number sentence to match them.

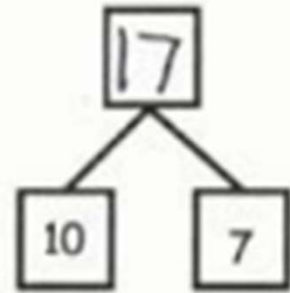
Example:



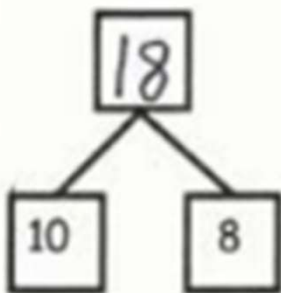
$$13 = 10 + 3$$



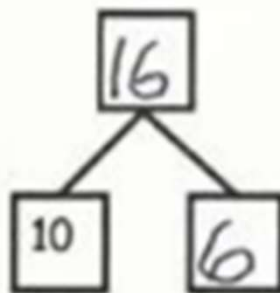
$$15 = 10 + 5$$



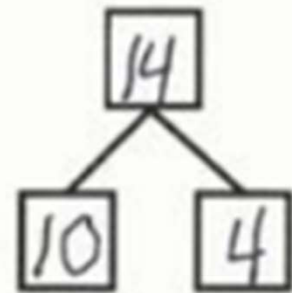
$$17 = 10 + 7$$



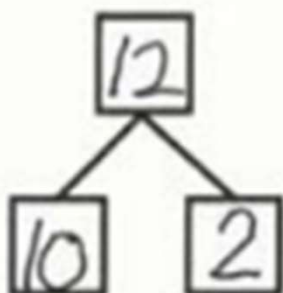
$$10 + 8 = 18$$



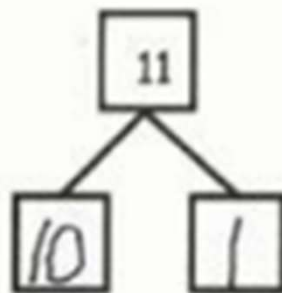
$$10 + 6 = 16$$



$$14 = 10 + 4$$



$$12 = 10 + 2$$



$$11 = 10 + 1$$