

# Comparison Word Problem Worksheets

Name \_\_\_\_\_

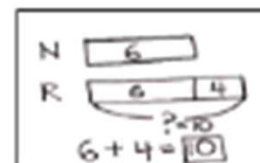
Date \_\_\_\_\_

Read the word problem.

Draw a tape diagram or double tape diagram and label.

Write a number sentence and a statement that matches the story.

Sample Tape Diagram



1. Kiana wrote 3 poems. She wrote 7 fewer than her sister Emi. How many poems did Emi write?

---

2. Maria used 14 beads to make a bracelet. Maria used 4 more beads than Kim. How many beads did Kim use to make her bracelet?

---

3. Peter drew 19 rocket ships. Rose drew 5 fewer rocket ships than Peter. How many rocket ships did Rose draw?

## Comparison Word Problem Worksheets

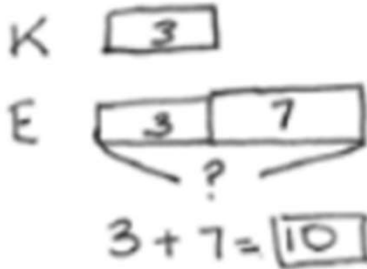
4. During the summer, Ben watched 9 movies. Lee watched 4 more movies than Ben. How many movies did Lee watch?

- 
5. Anton's family packed 10 suitcases for vacation. Anton's family packed 3 more suitcases than Fatima's family. How many suitcases did Fatima's family pack?

- 
6. Willie painted 9 fewer pictures than Julio. Julio painted 16 pictures. How many pictures did Willie paint?

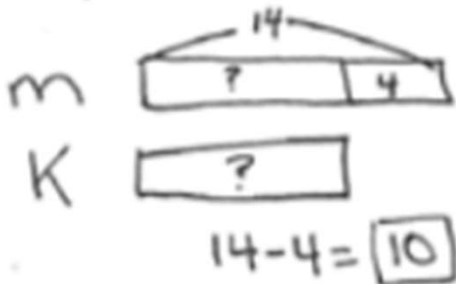
## Comparison Word Problem Worksheets

1. Kiana wrote 3 poems. She wrote 7 fewer than her sister Emi. How many poems did Emi write?



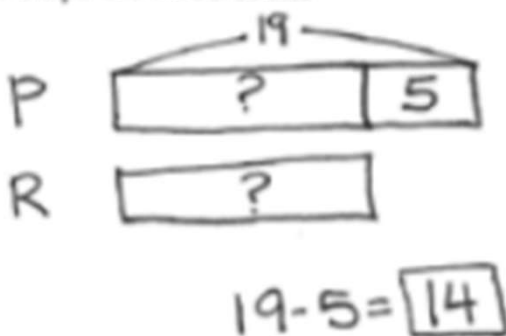
Emi wrote 10 poems

2. Maria used 14 beads to make a bracelet. Maria used 4 more beads than Kim. How many beads did Kim use to make her bracelet?



Kim used 10 beads

3. Peter drew 19 rocket ships. Rose drew 5 fewer rocket ships than Peter. How many rocket ships did Rose draw?



Rose drew 14  
rocket ships

## Comparison Word Problem Worksheets

4. During the summer, Ben watched 9 movies. Lee watched 4 more movies than Ben. How many movies did Lee watch?

B

L    
          ?           

$$9 + 4 = \boxed{13}$$

Lee watched  
13 movies.

- 
5. Anton's family packed 10 suitcases for vacation. Anton's family packed 3 more suitcases than Fatima's family. How many suitcases did Fatima's family pack?

A    
          ?           

F

$$10 - 3 = \boxed{7}$$

Fatima's family  
packed 7 suitcases.

- 
6. Willie painted 9 fewer pictures than Julio. Julio painted 16 pictures. How many pictures did Willie paint?

W

J    
          ?           

$$16 - 9 = \boxed{7}$$

Willie painted 7 pictures.