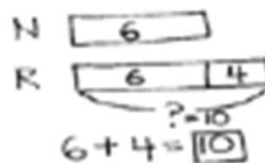


## Comparison Word Problem Worksheets

Read the word problem.

Draw a tape diagram or double tape diagram and label.

Write a number sentence and a statement that matches the story.



1. Nikil baked 5 pies for the contest. Peter baked 3 more pies than Nikil.  
How many pies did Peter bake for the contest?

$$5 + 3 = 8$$

Peter baked 8 pies.

- 
2. Emi planted 12 flowers. Rose planted 3 fewer flowers than Emi.  
How many flowers did Rose plant?

$$12 - 3 = 9$$

Rose planted 9 flowers.

- 
3. Ben scored 15 goals in the soccer game. Anton scored 11 goals.  
How many more goals did Ben score than Anton?

$$15 - 11 = 4$$

Ben scored 4 more goals.

## Comparison Word Problem Worksheets

4. Kim grew 12 roses in a garden. Fran grew 6 fewer roses than Kim.  
How many roses did Fran grow in the garden?

- 
5. Maria has 4 more fish in her tank than Shanika. Shanika has 16 fish.  
How many fish does Maria have in her tank?

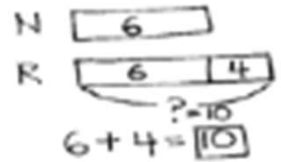
- 
6. Lee has 11 board games. Lee has 5 more board games than Darnel.  
How many board games does Darnel have?

# Comparison Word Problem Worksheets

Read the word problem.

Draw a tape diagram or double tape diagram and label.

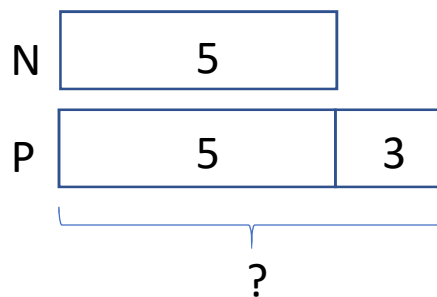
Write a number sentence and a statement that matches the story.



1. Nikil baked 5 pies for the contest. Peter baked 3 more pies than Nikil.  
How many pies did Peter bake for the contest?

$$5 + 3 = 8$$

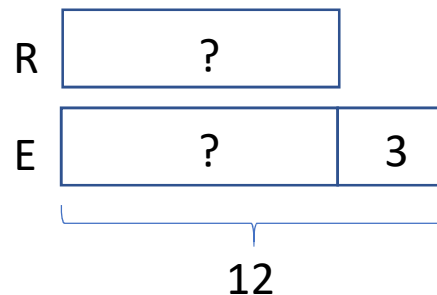
Peter baked 8 pies.



2. Emi planted 12 flowers. Rose planted 3 fewer flowers than Emi.  
How many flowers did Rose plant?

$$12 - 3 = 9$$

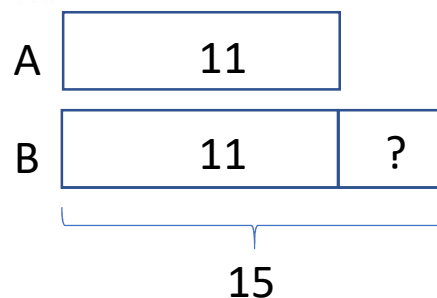
Rose planted 9 flowers.



3. Ben scored 15 goals in the soccer game. Anton scored 11 goals.  
How many more goals did Ben score than Anton?

$$15 - 11 = 4$$

Ben scored 4 more goals.

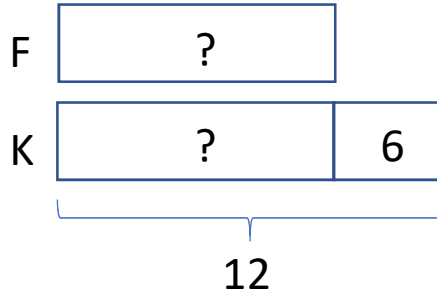


## Comparison Word Problem Worksheets

4. Kim grew 12 roses in a garden. Fran grew 6 fewer roses than Kim.  
How many roses did Fran grow in the garden?

$$12 - 6 = 6$$

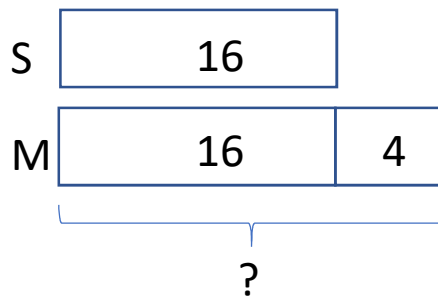
Fran grew 6 roses.



- 
5. Maria has 4 more fish in her tank than Shanika. Shanika has 16 fish.  
How many fish does Maria have in her tank?

$$16 + 4 = 20$$

Maria has 20 fish.



- 
6. Lee has 11 board games. Lee has 5 more board games than Darnel.  
How many board games does Darnel have?

$$11 - 5 = 6$$

Darnel has 6 board games.

