

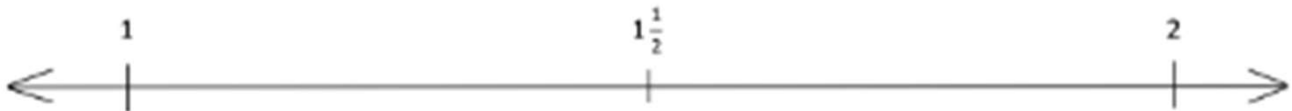
Compare Fraction Worksheets (using Benchmarks on the Number Line)

1. Place the following fractions on the number line given.

a. $\frac{4}{3}$

b. $\frac{11}{6}$

c. $\frac{17}{12}$



2. Use the number line in Problem 1 to compare the fractions by writing $>$, $<$, or $=$ on the lines.

a. $1\frac{5}{6}$ _____ $1\frac{5}{12}$

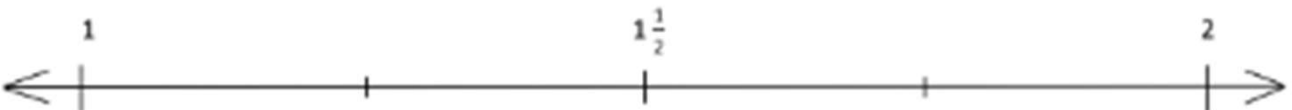
b. $1\frac{1}{3}$ _____ $1\frac{5}{12}$

3. Place the following fractions on the number line given.

a. $\frac{11}{8}$

b. $\frac{7}{4}$

c. $\frac{15}{12}$



4. Use the number line in Problem 3 to explain the reasoning you used when determining whether $\frac{11}{8}$ or $\frac{15}{12}$ is greater.

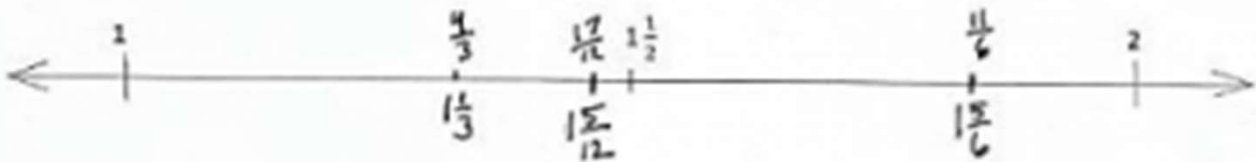
Compare Fraction Worksheets (using Benchmarks on the Number Line)

1. Place the following fractions on the number line given.

a. $\frac{4}{3}$

b. $\frac{11}{6}$

c. $\frac{17}{12}$



2. Use the number line in Problem 1 to compare the fractions by writing $>$, $<$, or $=$ on the lines.

a. $1\frac{5}{6} > 1\frac{5}{12}$

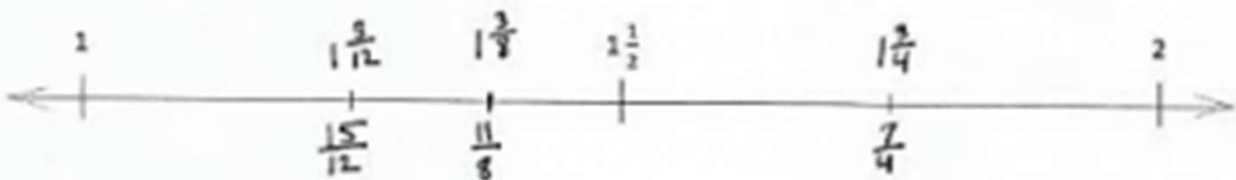
b. $1\frac{1}{3} < 1\frac{5}{12}$

3. Place the following fractions on the number line given.

a. $\frac{11}{8}$

b. $\frac{7}{4}$

c. $\frac{15}{12}$



4. Use the number line in Problem 3 to explain the reasoning you used when determining whether $\frac{11}{8}$ or $\frac{15}{12}$ is greater.

When I found where $\frac{11}{8}$ and $\frac{15}{12}$ were on the number line, $\frac{11}{8}$ is to the right of $\frac{15}{12}$ so I know it is greater.