

Arrays & Equal Groups Worksheets

Name _____

Date _____

1. Complete each missing part describing each array.

Circle rows.



5 rows of _____ = _____

_____ + _____ + _____ + _____ + _____ = _____

Circle columns.



3 columns of _____ = _____

_____ + _____ + _____ = _____


Circle rows.



4 rows of _____ = _____

_____ + _____ + _____ + _____ = _____

Circle columns.



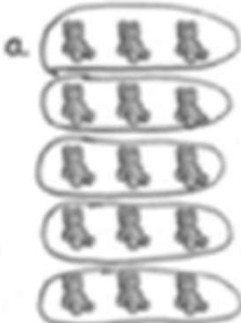
5 columns of _____ = _____

_____ + _____ + _____ + _____ + _____ = _____

Arrays & Equal Groups Worksheets

1. Complete each missing part describing each array.

Circle rows.



5 rows of 3 = 15

3 + 3 + 3 + 3 + 3 = 15

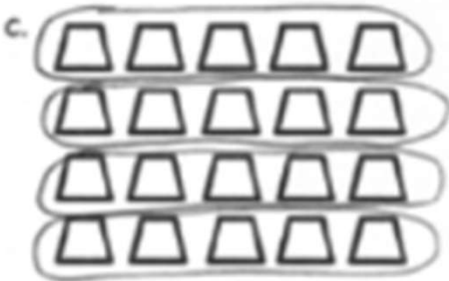
Circle columns.



3 columns of 5 = 15

5 + 5 + 5 = 15

Circle rows.



4 rows of 5 = 20

5 + 5 + 5 + 5 = 20

Circle columns.



5 columns of 4 = 20

4 + 4 + 4 + 4 + 4 = 20