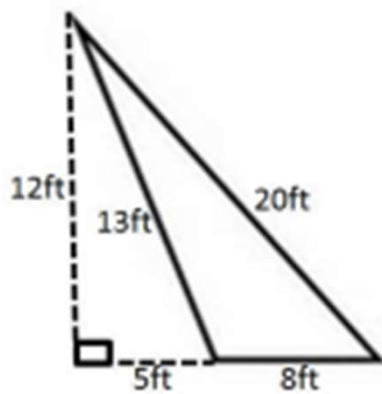
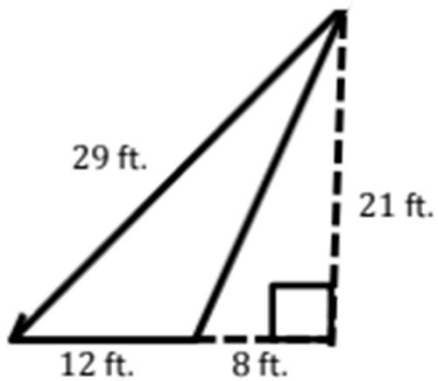
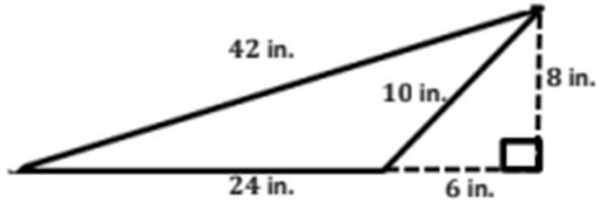


Area Worksheets (Triangles)

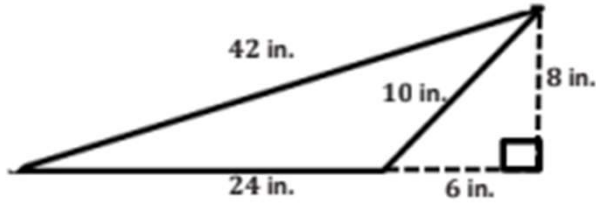
Calculate the area of each triangle.



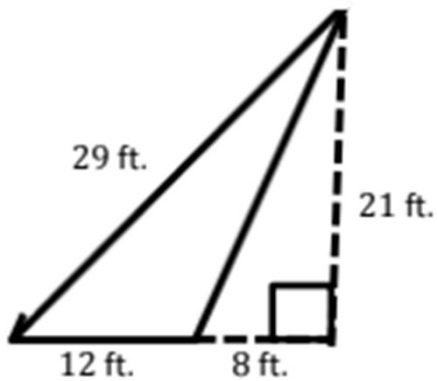
Go to [onlinemathlearning.com](https://www.onlinemathlearning.com) for more free math resources

Area Worksheets (Triangles)

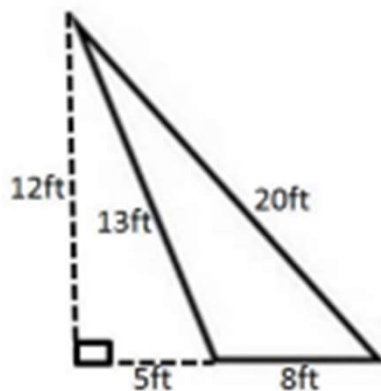
Calculate the area of each triangle.



$$A = \frac{1}{2}(24 \text{ in.})(8 \text{ in.}) = 96 \text{ in}^2$$



$$A = \frac{1}{2}(12 \text{ ft.})(21 \text{ ft.}) = 126 \text{ ft}^2$$



$$\begin{aligned} A &= \frac{1}{2}bh \\ &= \frac{1}{2}(8 \text{ ft.})(12 \text{ ft.}) \\ &= 48 \text{ ft}^2 \end{aligned}$$

Go to [onlinemathlearning.com](https://www.onlinemathlearning.com) for more free math resources