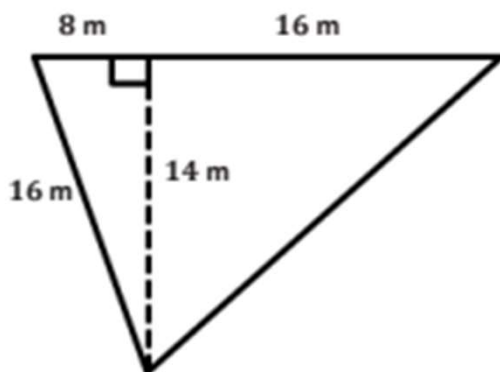
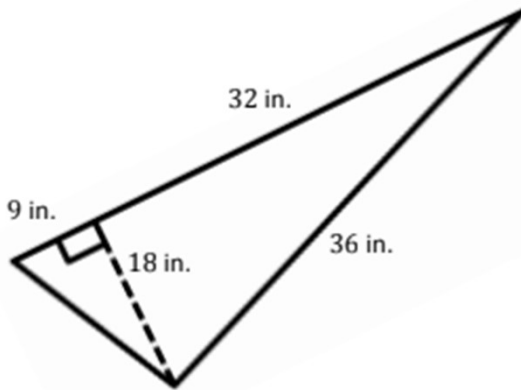
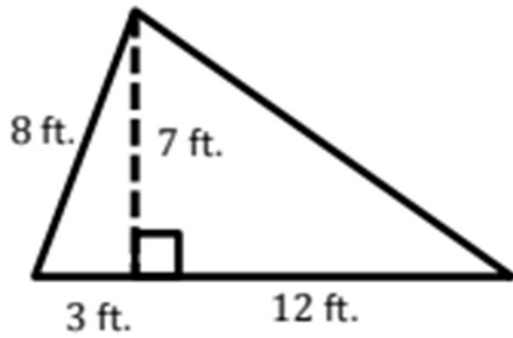


Area Worksheets (Triangles)

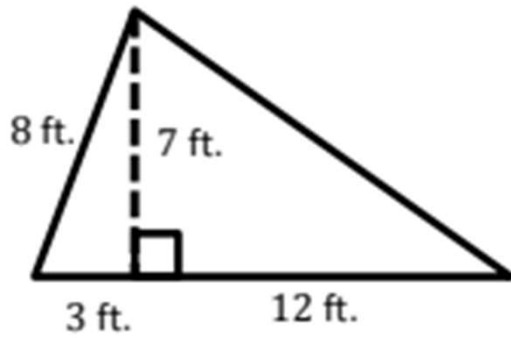
Calculate the area of each triangle.



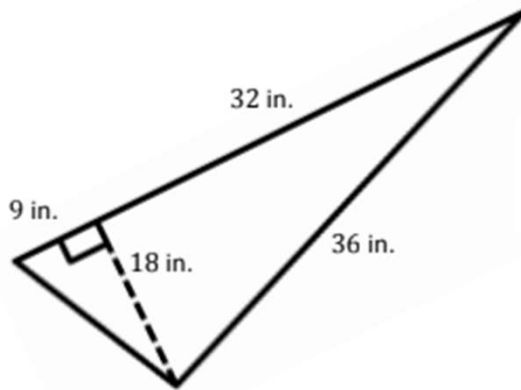
Go to [onlinemathlearning.com](https://www.onlinemathlearning.com) for more free math resources

Area Worksheets (Triangles)

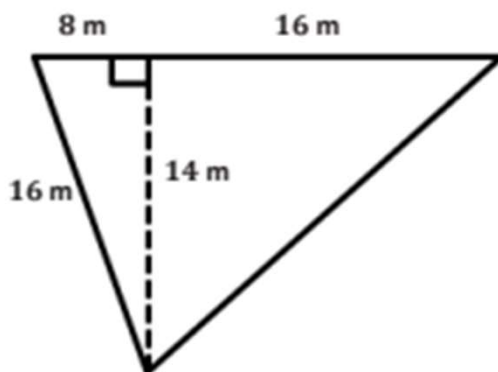
Calculate the area of each triangle.



$$A = \frac{1}{2}(15 \text{ ft.})(7 \text{ ft.}) = 52.5 \text{ ft}^2$$



$$A = \frac{1}{2}(41 \text{ in.})(18 \text{ in.}) = 369 \text{ in}^2$$



$$A = \frac{1}{2}(24 \text{ m})(14 \text{ m}) = 168 \text{ m}^2$$

Go to onlinemathlearning.com for more free math resources