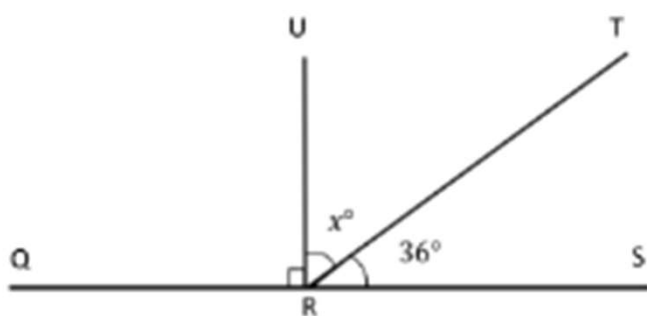
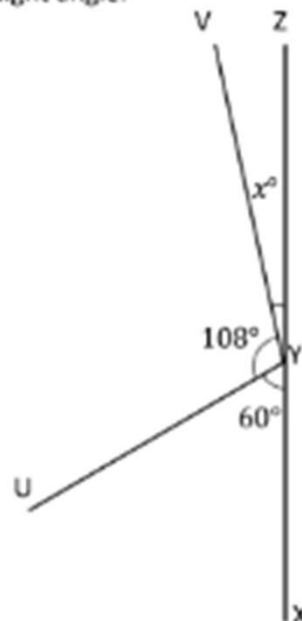


Geometry Worksheets (Adjacent Angles)

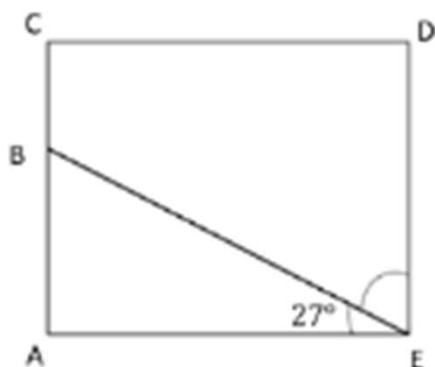
5. Solve for the measurement of $\angle TRU$.
 $\angle QRS$ is a straight angle.



6. Solve for the measurement of $\angle ZYV$.
 $\angle XYZ$ is a straight angle.

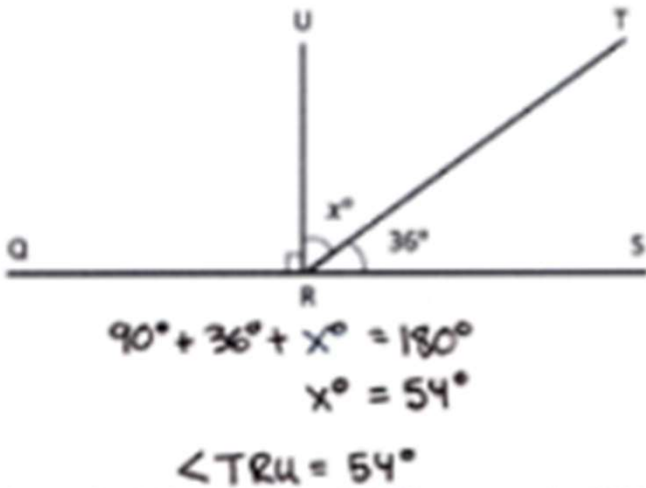


7. In the following figure, $ACDE$ is a rectangle. Without using a protractor, determine the measurement of $\angle DEB$. Write an equation that could be used to solve the problem.

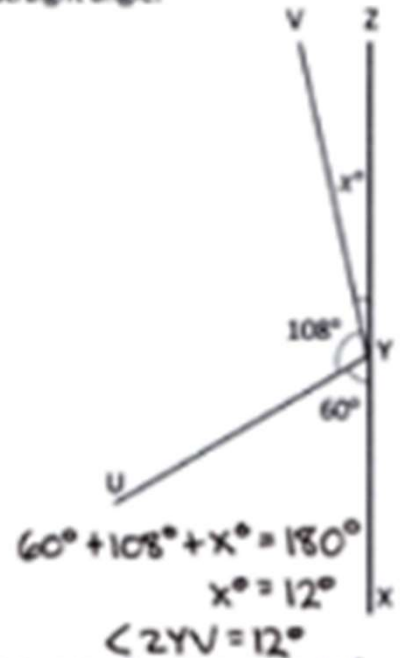


Geometry Worksheets (Adjacent Angles)

5. Solve for the measurement of $\angle TRU$.
 $\angle QRS$ is a straight angle.



6. Solve for the measurement of $\angle ZYV$.
 $\angle XYZ$ is a straight angle.



7. In the following figure, $ACDE$ is a rectangle. Without using a protractor, determine the measurement of $\angle DEB$. Write an equation that could be used to solve the problem.

