


Addition to 9 Worksheets

Name _____

Date _____

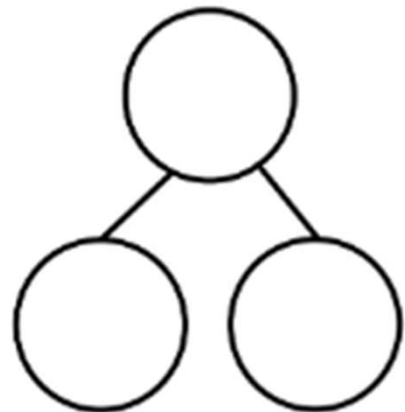
Shane played with 5 toy zebras and 4 toy lions. He had 9 animal toys in all.
Fill in the number sentence.



$$\square + \square = \square$$

Jimmy had 9 marbles. 8 were red, and 1 was green.
Fill in the number sentence.

$$\square + \square = \square$$




Addition to 9 Worksheets

Name _____

Date _____

Shane played with 5 toy zebras and 4 toy lions. He had 9 animal toys in all.
Fill in the number sentence.



$$\boxed{5} + \boxed{4} = \boxed{9}$$

Jimmy had 9 marbles. 8 were red, and 1 was green.
Fill in the number sentence.

$$\boxed{8} + \boxed{1} = \boxed{9}$$

