


Addition to 9 Worksheets

Name _____

Date _____

Izzy had a tea party with 7 teddy bears and 2 dolls. There were 9 friends at the party. Fill in the number bond and number sentence.



A number bond with the number 9 in the left circle and two empty circles on the right.

$$9 = \square + \square$$

Robin had 9 vegetables on her plate. She had 3 carrots and 6 peas. Fill in the number sentence.



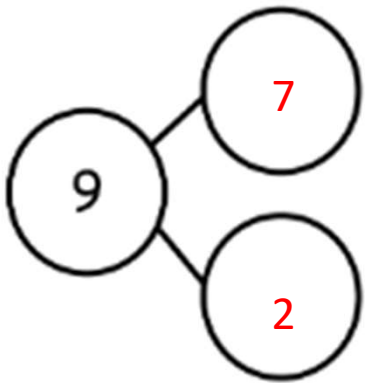

$$9 = \square + \square$$

Addition to 9 Worksheets

Name _____

Date _____

Izzy had a tea party with 7 teddy bears and 2 dolls. There were 9 friends at the party. Fill in the number bond and number sentence.


$$9 = \boxed{7} + \boxed{2}$$

Robin had 9 vegetables on her plate. She had 3 carrots and 6 peas. Fill in the number sentence.



$$9 = \boxed{3} + \boxed{6}$$