

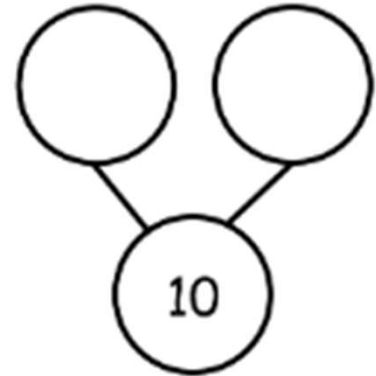
Addition to 10 Worksheets

Name _____

Date _____

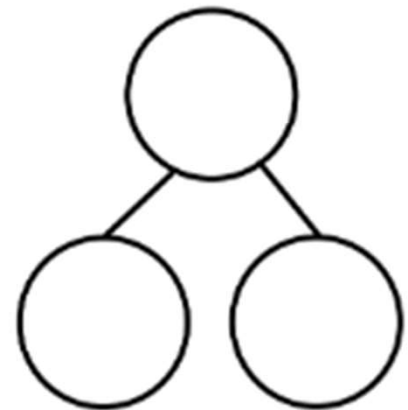

Fill in the number bonds, and complete the number sentences.

Ricky has 10 space toys. He has 7 rockets and 3 astronauts.



$$10 = \square + \square$$

Bianca has 4 pigs and 6 sheep on her farm. She has 10 animals altogether.



$$\square + \square = \square$$

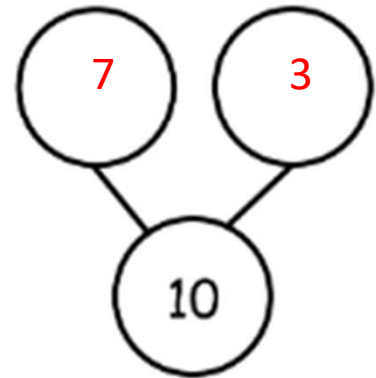
Addition to 10 Worksheets

Name _____

Date _____

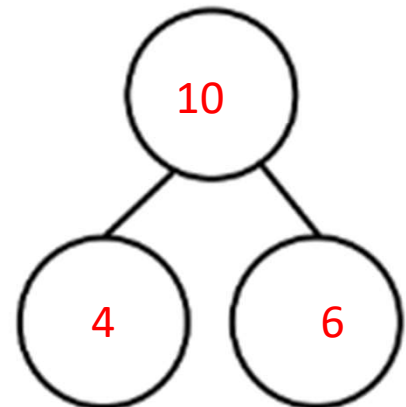

Fill in the number bonds, and complete the number sentences.

Ricky has 10 space toys. He has 7 rockets and 3 astronauts.



$$10 = \boxed{7} + \boxed{3}$$

Bianca has 4 pigs and 6 sheep on her farm. She has 10 animals altogether.



$$\boxed{4} + \boxed{6} = \boxed{10}$$