
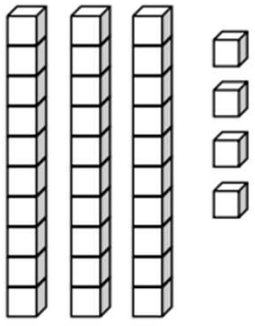
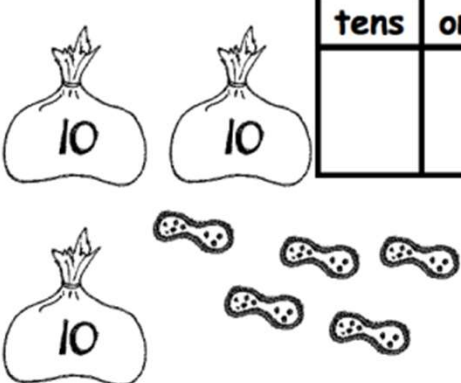




Add Tens and Ones Worksheets

Write the tens and ones. Then write an addition sentence to add the tens and ones.

<p>1.</p>  <table border="1" data-bbox="518 347 742 548"><thead><tr><th>tens</th><th>ones</th></tr></thead><tbody><tr><td> </td><td> </td></tr></tbody></table> <p><u>10</u> + <u> </u> = <u> </u></p>	tens	ones			<p>2.</p>  <table border="1" data-bbox="1149 347 1372 548"><thead><tr><th>tens</th><th>ones</th></tr></thead><tbody><tr><td> </td><td> </td></tr></tbody></table> <p><u> </u> + <u>4</u> = <u> </u></p>	tens	ones		
tens	ones								
tens	ones								
<p>3.</p>  <table border="1" data-bbox="518 817 742 1019"><thead><tr><th>tens</th><th>ones</th></tr></thead><tbody><tr><td> </td><td> </td></tr></tbody></table> <p><u> </u> = <u>30</u> + <u> </u></p>	tens	ones			<p>4.</p>  <table border="1" data-bbox="1149 817 1372 1019"><thead><tr><th>tens</th><th>ones</th></tr></thead><tbody><tr><td> </td><td> </td></tr></tbody></table> <p><u> </u> = <u>6</u> + <u> </u></p>	tens	ones		
tens	ones								
tens	ones								

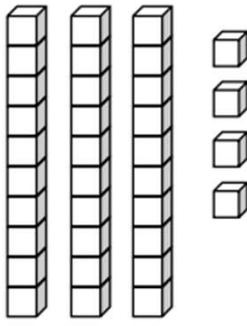
Add Tens and Ones Worksheets

Write the tens and ones. Then write an addition sentence to add the tens and ones.

1. 

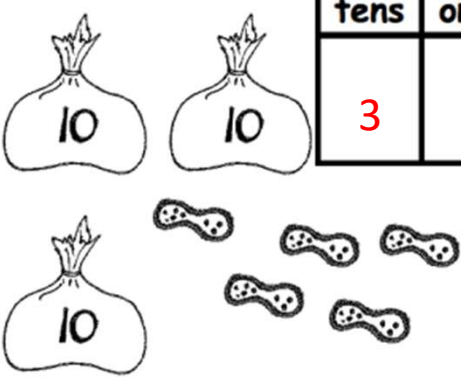
tens	ones
1	3

$$\underline{10} + \underline{3} = \underline{13}$$

2. 


tens	ones
3	4

$$\underline{30} + \underline{4} = \underline{34}$$

3. 

tens	ones
3	5

$$\underline{35} = \underline{30} + \underline{5}$$

4. 

tens	ones
2	6

$$\underline{26} = \underline{6} + \underline{20}$$