

NAME _____

DATE _____

PERIOD _____

Unit 2, Lesson 4: Dilations on a Square Grid

Let's dilate figures on a rectangular grid.

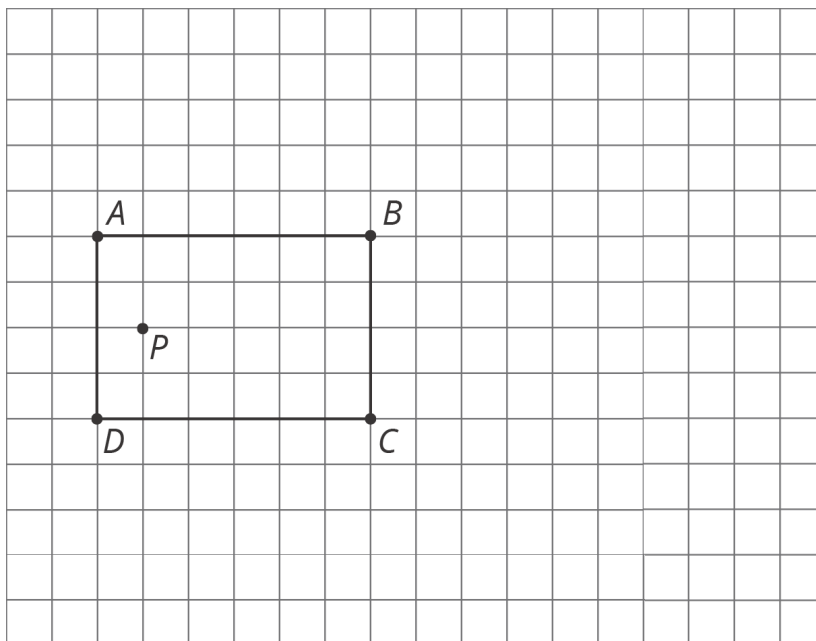
4.1: Estimating a Scale Factor



Point C is the dilation of point B with center of dilation A and scale factor s . Estimate s . Be prepared to explain your reasoning.

4.2: Dilations on a Grid

- Find the dilation of quadrilateral $ABCD$ with center P and scale factor 2.



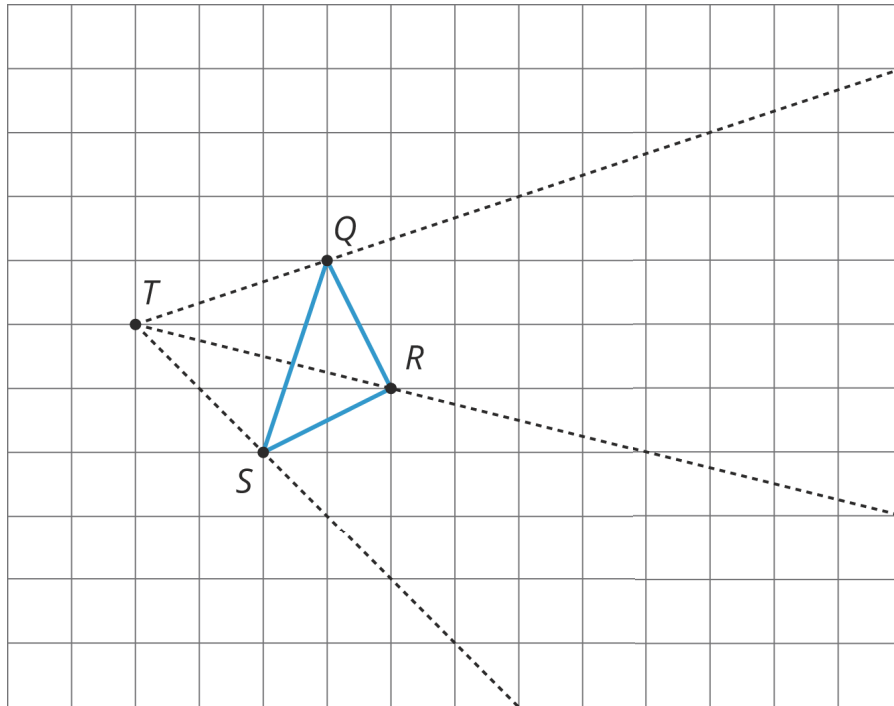
NAME _____

DATE _____

PERIOD _____

2. Find the dilation of triangle QRS with center T and scale factor 2.

3. Find the dilation of triangle QRS with center T and scale factor $\frac{1}{2}$.



4.3: Card Sort: Matching Dilations on a Coordinate Grid

Your teacher will give you some cards. Each of Cards 1 through 6 shows a figure in the coordinate plane and describes a dilation.

Each of Cards A through E describes the image of the dilation for one of the numbered cards.

Match number cards with letter cards. One of the number cards will not have a match. For this card, you'll need to draw an image.

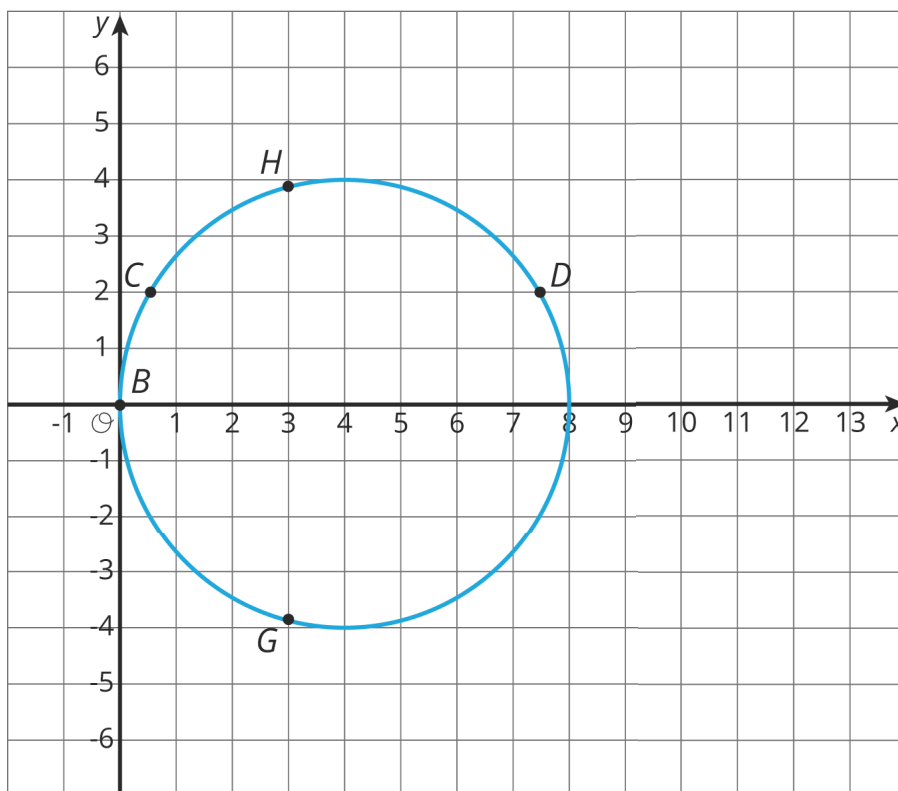
NAME _____

DATE _____

PERIOD _____

Are you ready for more?

The image of a circle under dilation is a circle when the center of the dilation is the center of the circle. What happens if the center of dilation is a point on the circle? Using center of dilation $(0, 0)$ and scale factor 1.5, dilate the circle shown on the diagram. This diagram shows some points to try dilating.



NAME _____

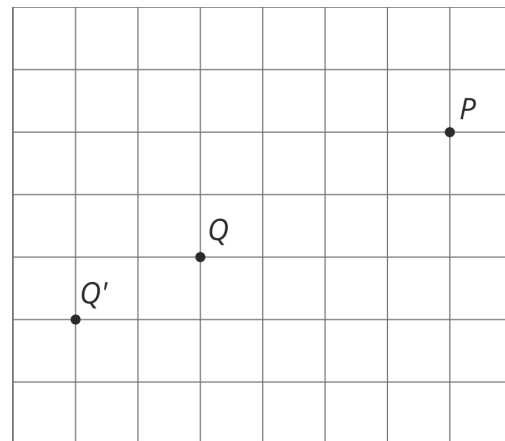
DATE _____

PERIOD _____

Lesson 4 Summary

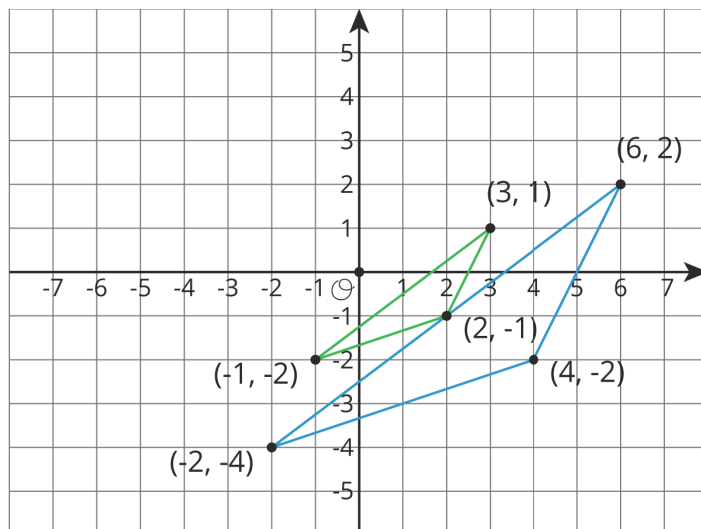
Square grids can be useful for showing dilations. The grid is helpful especially when the center of dilation and the point(s) being dilated lie at grid points. Rather than using a ruler to measure the distance between the points, we can count grid units.

For example, suppose we want to dilate point Q with center of dilation P and scale factor $\frac{3}{2}$. Since Q is 4 grid squares to the left and 2 grid squares down from P , the dilation will be 6 grid squares to the left and 3 grid squares down from P (can you see why?). The dilated image is marked as Q' in the picture.



Sometimes the square grid comes with coordinates. The coordinate grid gives us a convenient way to *name* points, and sometimes the coordinates of the image can be found with just arithmetic.

For example, to make a dilation with center $(0, 0)$ and scale factor 2 of the triangle with coordinates $(-1, -2)$, $(3, 1)$, and $(2, -1)$, we can just double the coordinates to get $(-2, -4)$, $(6, 2)$, and $(4, -2)$.



NAME _____

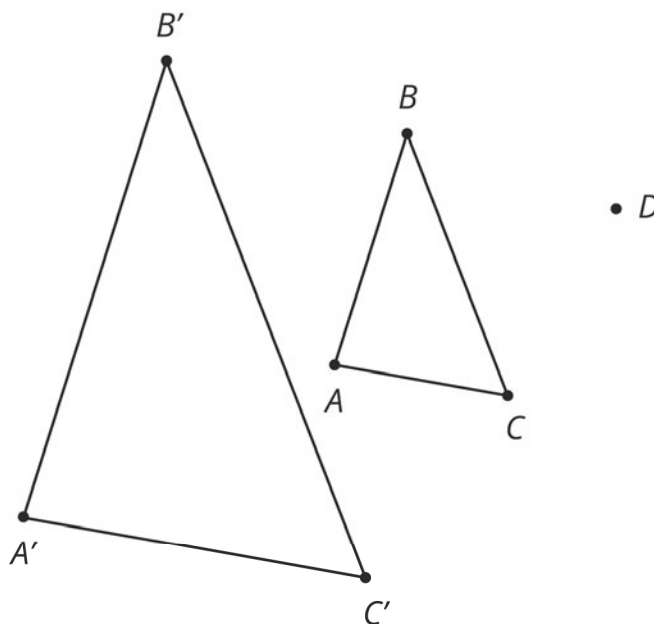
DATE _____

PERIOD _____

Unit 2, Lesson 4: Dilations on a Square Grid

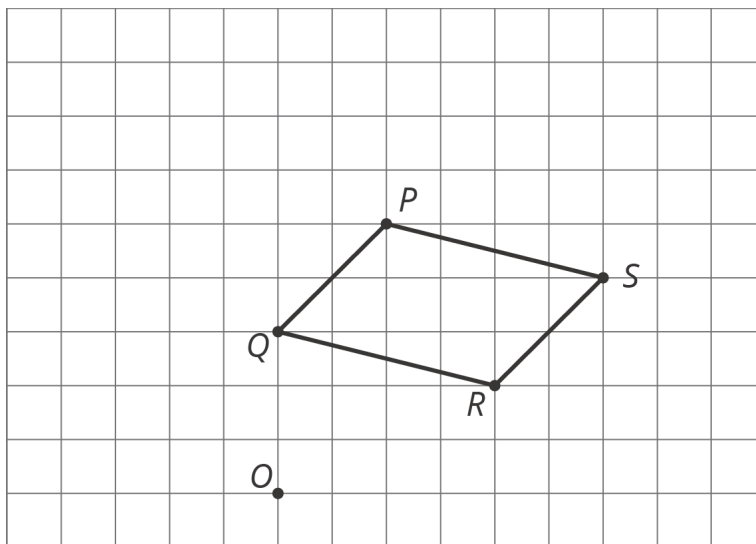
1. Triangle ABC is dilated using D as the center of dilation with scale factor 2.

The image is triangle $A'B'C'$.
 Clare says the two triangles are congruent, because their angle measures are the same.
 Do you agree? Explain how you know.



2. On graph paper, sketch the image of quadrilateral PQRS under the following dilations:

- The dilation centered at R with scale factor 2.
- The dilation centered at O with scale factor $\frac{1}{2}$.
- The dilation centered at S with scale factor $\frac{1}{2}$.

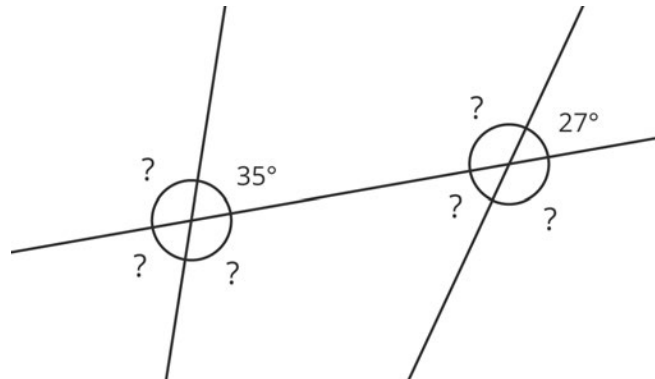


NAME _____

DATE _____

PERIOD _____

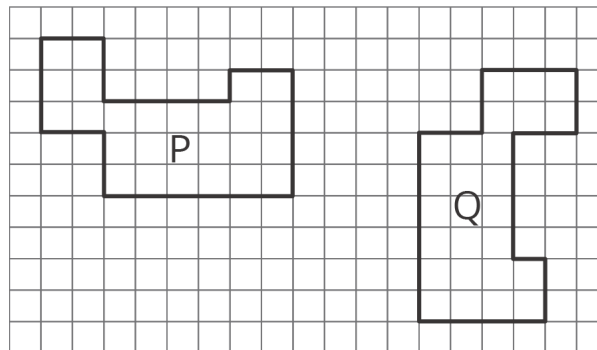
3. The diagram shows three lines with some marked angle measures.



Find the missing angle measures marked with question marks.

(from Unit 1, Lesson 14)

4. Describe a sequence of translations, rotations, and reflections that takes Polygon P to Polygon Q.



(from Unit 1, Lesson 4)

5. Point B has coordinates $(-2, -5)$. After a translation 4 units down, a reflection across the y -axis, and a translation 6 units up, what are the coordinates of the image?

(from Unit 1, Lesson 6)